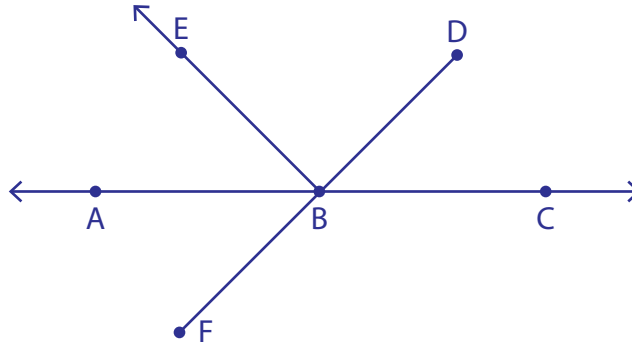


Lines, Rays and Line segments

Level 1: S1

Read the figure and answer the questions.

1)



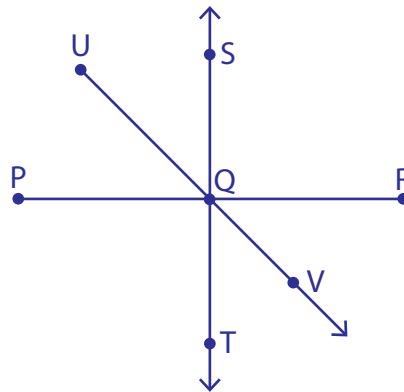
a) Name all the points.

b) Name any three rays.

c) Name any two line segments.

d) Name the line in two ways.

2)



a) Name the line that contains the point Q.

b) Name the two opposite rays.

c) Name the end point of \overrightarrow{QT} .

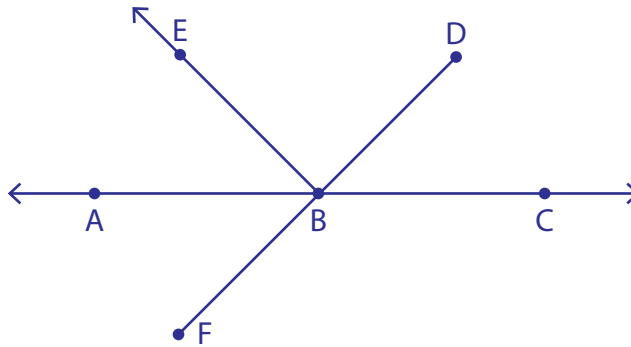
d) Name all the points that lie on the \overleftrightarrow{ST} .

Lines, Rays and Line segments

Level 1: S1

Read the figure and answer the questions.

1)



a) Name all the points.

Points A, B, C, D, E and F

b) Name any three rays.

 \vec{BE} , \vec{BA} and \vec{BC}

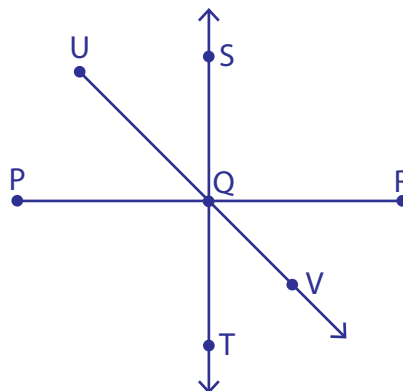
c) Name any two line segments.

 \overline{BD} and \overline{BF}

d) Name the line in two ways.

 \overleftrightarrow{AC} and \overleftrightarrow{CA}

2)



a) Name the line that contains the point Q.

 \overleftrightarrow{ST}

b) Name the two opposite rays.

 \vec{QS} and \vec{QT} c) Name the end point of \vec{QT} .**Point Q**d) Name all the points that lie on the \overleftrightarrow{ST} .**Points Q, S and T**