

Student Name: \_\_\_\_\_

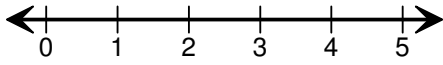
Score: \_\_\_\_\_

### Addition Using Number Line

Sum up to 5

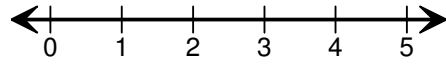
Draw hops to show the addition sentence and find the sum.

1)



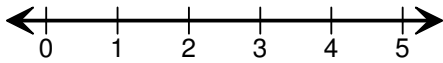
$$1 + 3 = \boxed{\phantom{00}}$$

2)



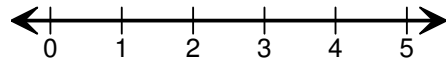
$$2 + 2 = \boxed{\phantom{00}}$$

3)



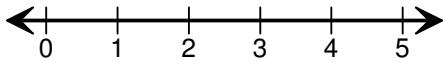
$$3 + 2 = \boxed{\phantom{00}}$$

4)



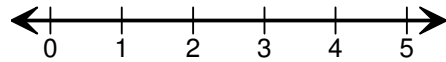
$$1 + 1 = \boxed{\phantom{00}}$$

5)



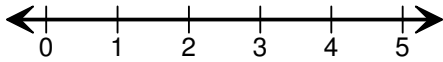
$$2 + 1 = \boxed{\phantom{00}}$$

6)



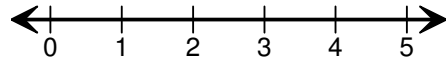
$$3 + 1 = \boxed{\phantom{00}}$$

7)



$$1 + 4 = \boxed{\phantom{00}}$$

8)



$$2 + 3 = \boxed{\phantom{00}}$$

Student Name: \_\_\_\_\_

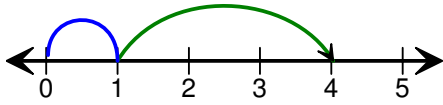
Score: \_\_\_\_\_

**Answer key**

**Addition Using Number Line**

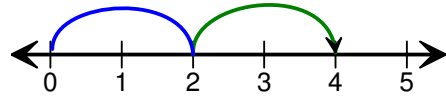
Sum up to 5

1)



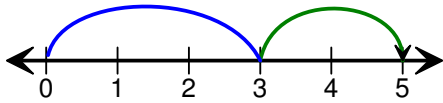
$$1 + 3 = \boxed{4}$$

2)



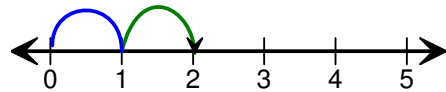
$$2 + 2 = \boxed{4}$$

3)



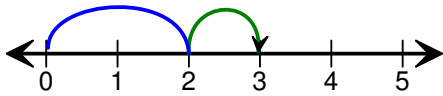
$$3 + 2 = \boxed{5}$$

4)



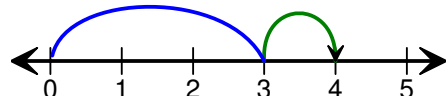
$$1 + 1 = \boxed{2}$$

5)



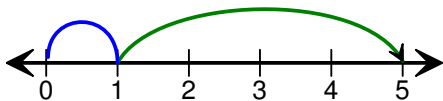
$$2 + 1 = \boxed{3}$$

6)



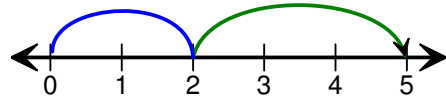
$$3 + 1 = \boxed{4}$$

7)



$$1 + 4 = \boxed{5}$$

8)



$$2 + 3 = \boxed{5}$$