

Student Name: \_\_\_\_\_

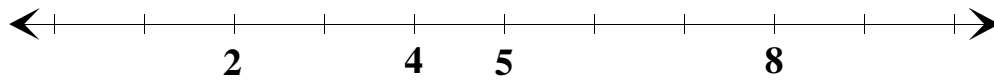
Score: \_\_\_\_\_

### Missing Numerals

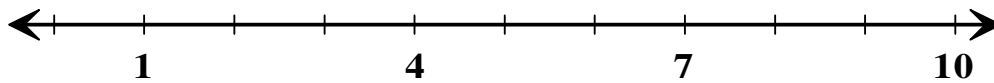
Sheet 1

Write the missing numerals below the number line.

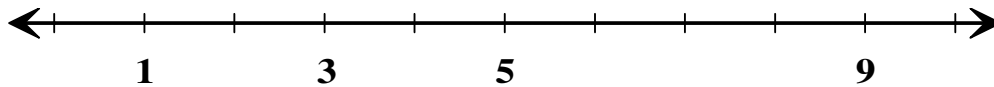
1)



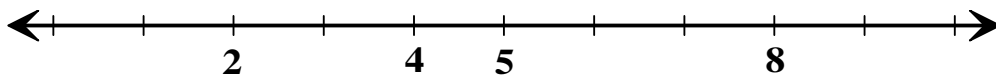
2)



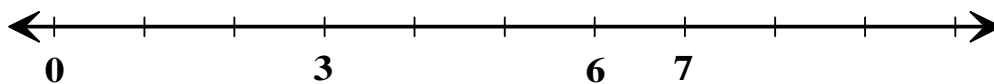
3)



4)



5)



Student Name: \_\_\_\_\_

Score: \_\_\_\_\_

**Answer key**

**Missing Numerals**

Sheet 1

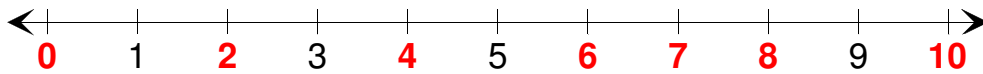
1)



2)



3)



4)



5)

