

Student Name: _____

Score: _____

Subtraction using number line

L1S1

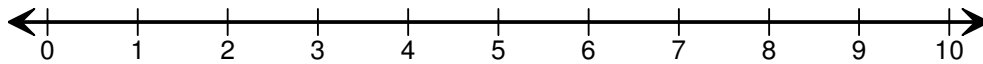
Draw hops to show the subtraction sentence and find the difference.

1)



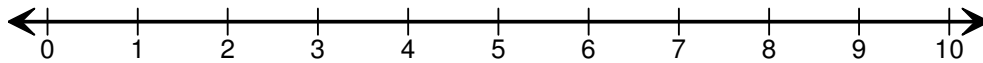
$$4 - 2 = \boxed{}$$

2)



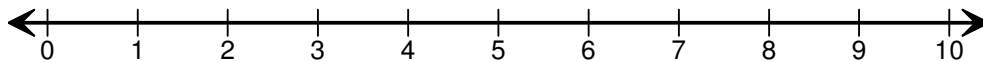
$$6 - 3 = \boxed{}$$

3)



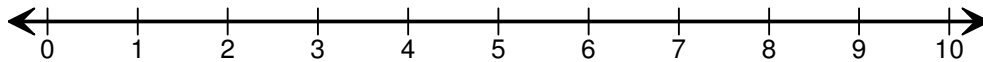
$$8 - 4 = \boxed{}$$

4)



$$7 - 4 = \boxed{}$$

5)



$$8 - 3 = \boxed{}$$

Student Name: _____

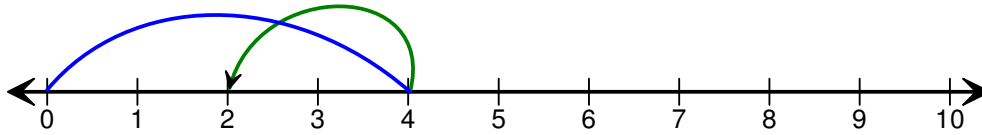
Score: _____

Answer key

Subtraction using number line

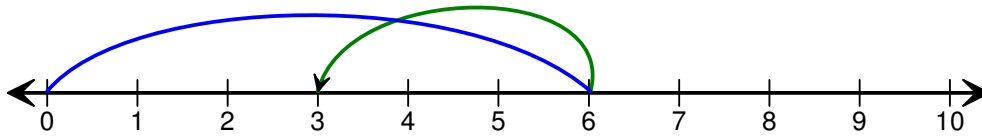
L1S1

1)



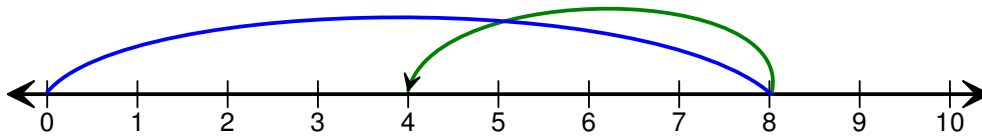
$$4 - 2 = \boxed{2}$$

2)



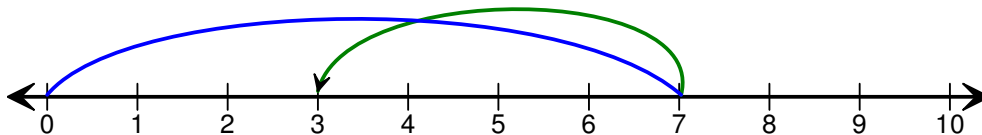
$$6 - 3 = \boxed{3}$$

3)



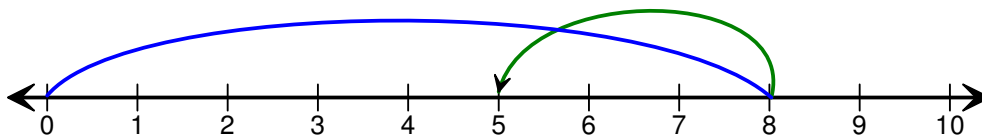
$$8 - 4 = \boxed{4}$$

4)



$$7 - 4 = \boxed{3}$$

5)



$$8 - 3 = \boxed{5}$$