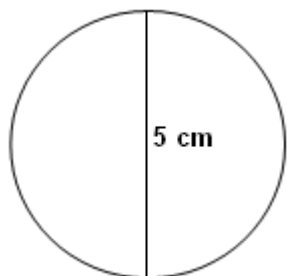


Student Name: _____

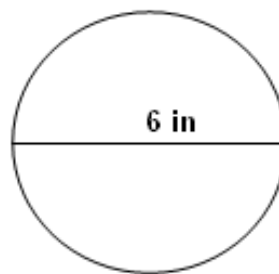
Score: _____

Perimeter of Circle Worksheet

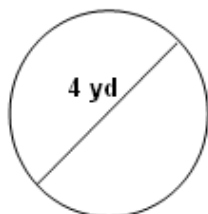
Find the perimeter of the circle in terms of π for the given diameter:



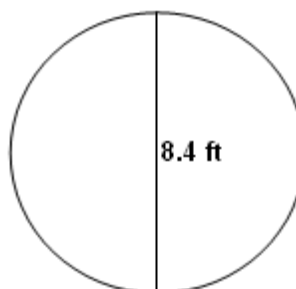
Perimeter= _____



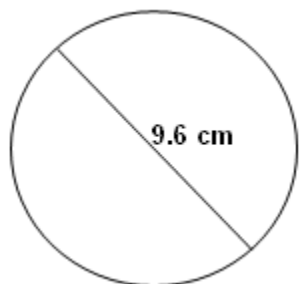
Perimeter= _____



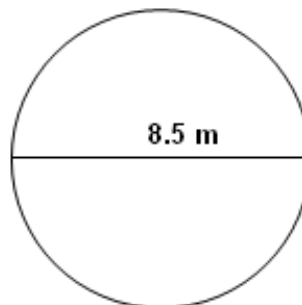
Perimeter= _____



Perimeter= _____



Perimeter= _____

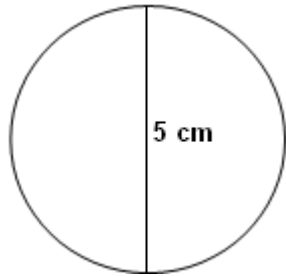


Perimeter= _____

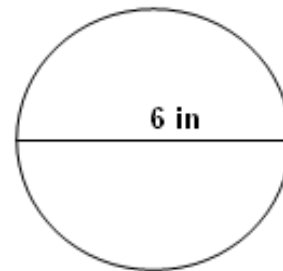
Student Name: _____

Score: _____

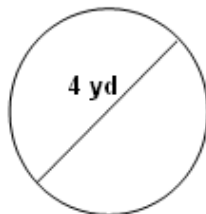
Answers



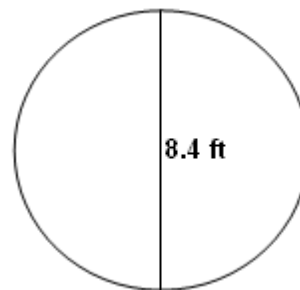
Perimeter= 5π cm



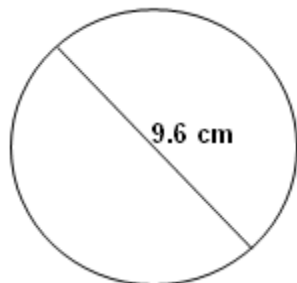
Perimeter= 6π in



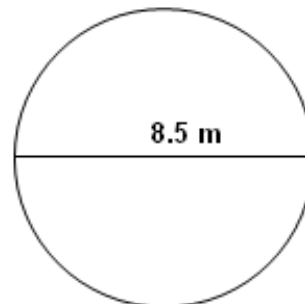
Perimeter= 4π yd



Perimeter= 8.4π ft



Perimeter= 9.6π cm



Perimeter= 8.5π m