

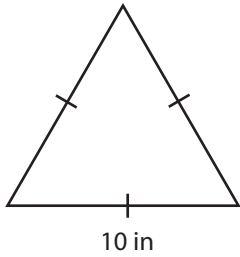
Name : _____

Triangle - Perimeter

Congruent sides: S1

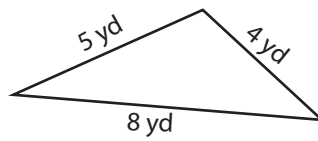
Find the perimeter of each triangle.

1)



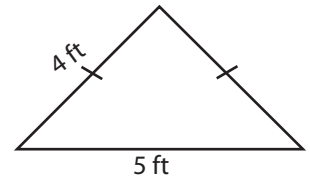
Perimeter =

2)



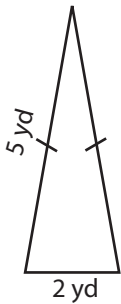
Perimeter =

3)



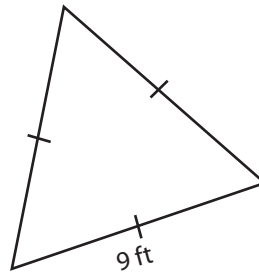
Perimeter =

4)



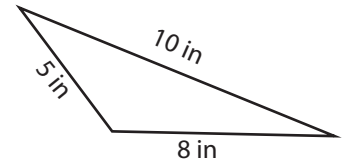
Perimeter =

5)



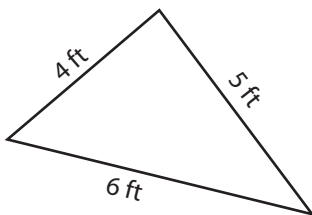
Perimeter =

6)



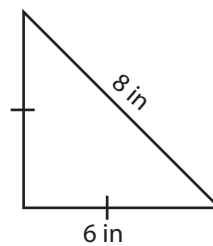
Perimeter =

7)



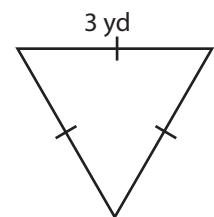
Perimeter =

8)



Perimeter =

9)



Perimeter =

Name : _____

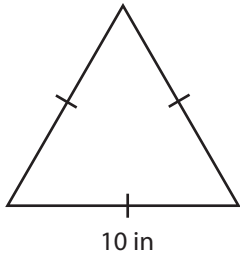
Answer key

Triangle - Perimeter

Congruent sides: S1

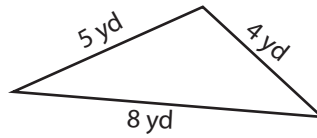
Find the perimeter of each triangle.

1)



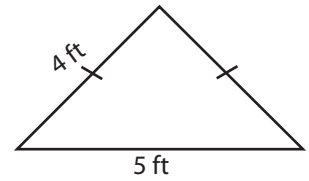
Perimeter = **30 in**

2)



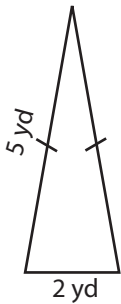
Perimeter = **17 yd**

3)



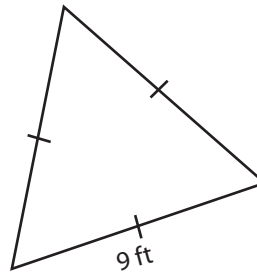
Perimeter = **13 ft**

4)



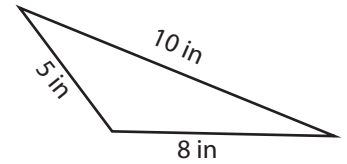
Perimeter = **12 yd**

5)



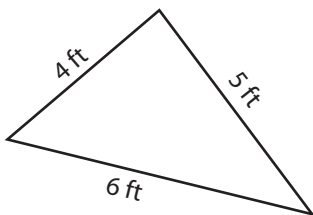
Perimeter = **27 ft**

6)



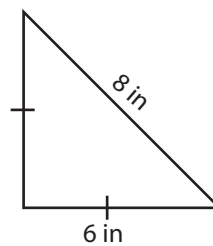
Perimeter = **23 in**

7)



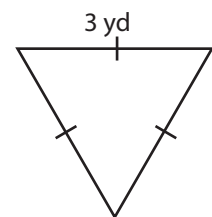
Perimeter = **15 ft**

8)



Perimeter = **20 in**

9)



Perimeter = **9 yd**