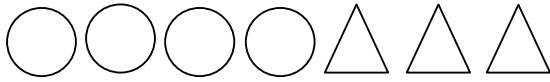


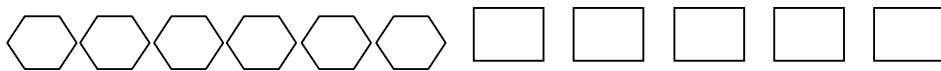
Name: _____

Score: _____

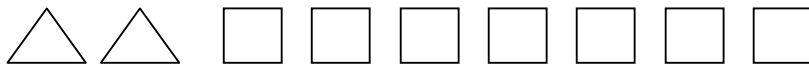
Ratio Worksheet



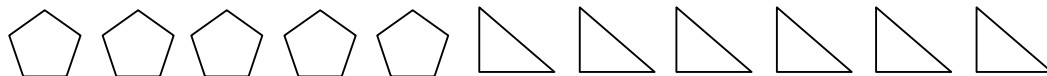
Ratio of circles to triangles is _____



Ratio of hexagons to rectangles is _____



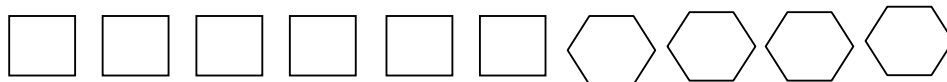
Ratio of triangles to squares is _____



Ratio of pentagons to triangles is _____



Ratio of triangles to trapezoids is _____

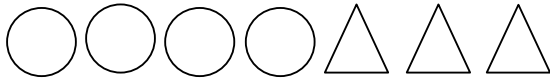


Ratio of squares to hexagons is _____

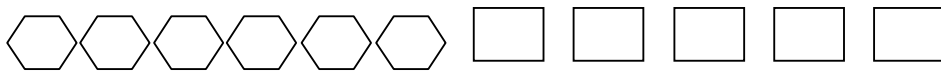
Name: _____

Score: _____

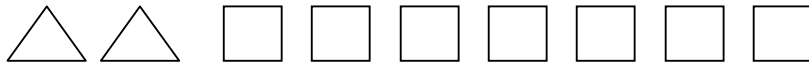
Answers



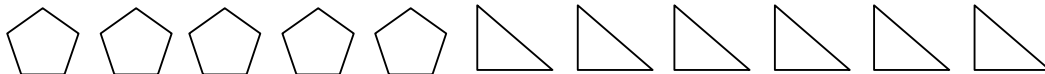
Ratio of circles to triangles is **4:3**



Ratio of hexagons to rectangles is **6:5**



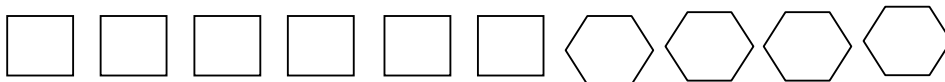
Ratio of triangles to squares is **2:7**



Ratio of pentagons to triangles is **5:6**



Ratio of triangles to trapezoids is **3:5**



Ratio of squares to hexagons is **6:4**