



Shapes - Sides

Sheet 1

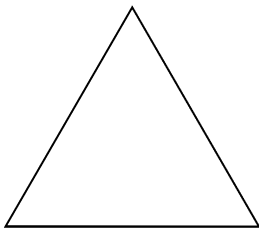
Fill up the blanks:



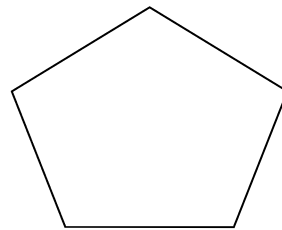
Circle has _____ sides.



Square has _____ sides.



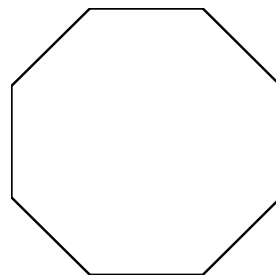
Triangle has _____ sides.



Pentagon has _____ sides.



Rectangle has _____ sides.



Octagon has _____ sides.

Name: _____


Score: _____

Answer key


Shapes - Sides

Sheet 1

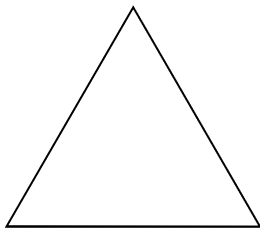
Fill up the blanks:



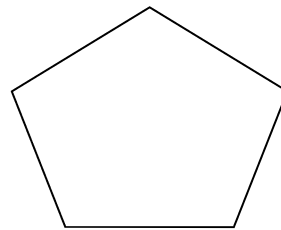
Circle has no sides.



Square has 4 sides.



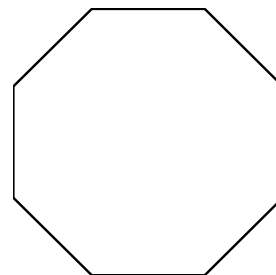
Triangle has 3 sides.



Pentagon has 5 sides.



Rectangle has 4 sides.



Octagon has 8 sides.