

Name : _____

Skip Counting by 3s

Sheet 5

- 1) Count by 3s, and write how many hats are there altogether.



3



6




9





12

- 2) Count by 3s, and write how many pineapples are there in total.









- 3) Count by 3s, and










- 4) Count by 3s, and











there in total.

- 5) Count by 3s, and write how many bottles are there in all.







PREVIEW

Gain complete access to the largest collection of worksheets in all subjects!

Members, please log in to download this worksheet.

Not a member? Please sign up to gain complete access.

www.mathworksheets4kids.com