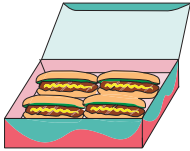


Name : \_\_\_\_\_

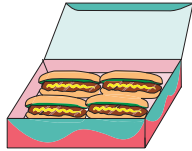
## Skip Counting by 4s

Sheet 4

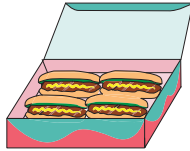
- 1) Count by 4s, and write how many hot dogs are there altogether?



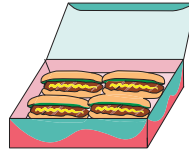
4



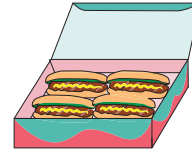
8



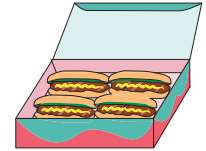
12



16

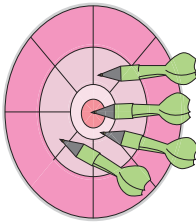


20

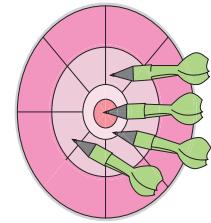


24

- 2) Count by 4s, and write how many darts are there in all?

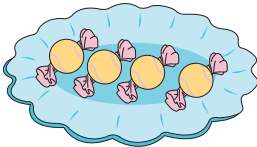


\_\_\_\_\_



\_\_\_\_\_


- 3) Count by 4s, and



\_\_\_\_\_




\_\_\_\_\_



\_\_\_\_\_

- 4) Count by 4s, and



\_\_\_\_\_




\_\_\_\_\_




\_\_\_\_\_



\_\_\_\_\_




\_\_\_\_\_




\_\_\_\_\_


- 5) Count by 4s, and write how many pears are there in total?




\_\_\_\_\_



\_\_\_\_\_



\_\_\_\_\_



\_\_\_\_\_

**PREVIEW**

Gain complete access to the largest collection of worksheets in all subjects!

Members, please log in to download this worksheet.

Not a member? Please sign up to gain complete access.

[www.mathworksheets4kids.com](http://www.mathworksheets4kids.com)