

Name : _____

Skip Counting by 4s

Sheet 5

- 1) Count by 4s, and write how many pearls are there in total?



4



8



12



16



20

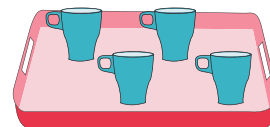


24



- 2) Count by 4s, and write how many birds are there altogether?



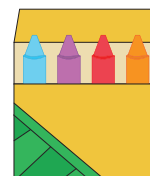
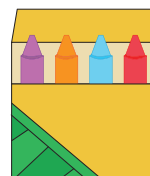



- 3) Count by 4s, and



- 4) Count by 4s, and



- 5) Count by 4s, and write how many crayons are there in all?



PREVIEW

Gain complete access to the largest collection of worksheets in all subjects!

Members, please log in to download this worksheet.

Not a member? Please sign up to gain complete access.

www.mathworksheets4kids.com