

Student Name: \_\_\_\_\_

Score: \_\_\_\_\_

**Line, Ray and Line Segment**

Draw the line, ray and line segment in the space provided:

Line

Ray

Line Segment

Line

Ray

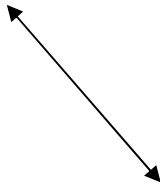
Line Segment

Student Name: \_\_\_\_\_

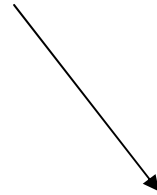
Score: \_\_\_\_\_

**Answers**

Line



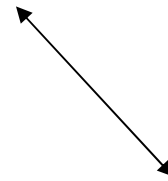
Ray



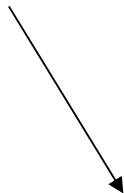
Line Segment



Line



Ray



Line Segment

