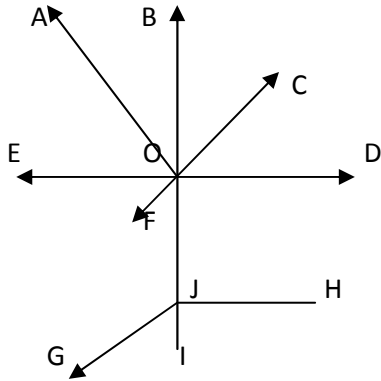


Student Name: \_\_\_\_\_

Score: \_\_\_\_\_

### Identify Line, Ray and Line Segment

Fill in the blanks with ray/line/line segment in the appropriate places:



OA is a \_\_\_\_\_

ED is a \_\_\_\_\_

JH is a \_\_\_\_\_

IB is a \_\_\_\_\_

CF is a \_\_\_\_\_

OJ is a \_\_\_\_\_

JG is a \_\_\_\_\_

OI is a \_\_\_\_\_

OE is a \_\_\_\_\_

JI is a \_\_\_\_\_

AN is a \_\_\_\_\_

LM is a \_\_\_\_\_

KC is a \_\_\_\_\_

DJ is a \_\_\_\_\_

HI is a \_\_\_\_\_

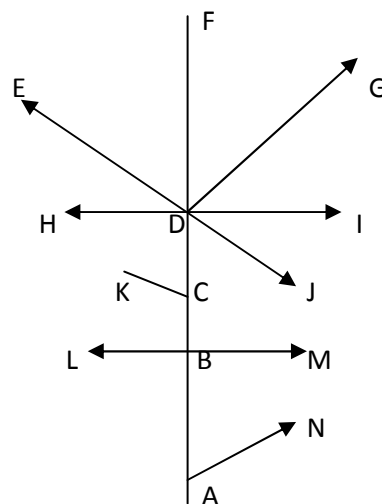
DG is a \_\_\_\_\_

AF is a \_\_\_\_\_

DH is a \_\_\_\_\_

AD is a \_\_\_\_\_

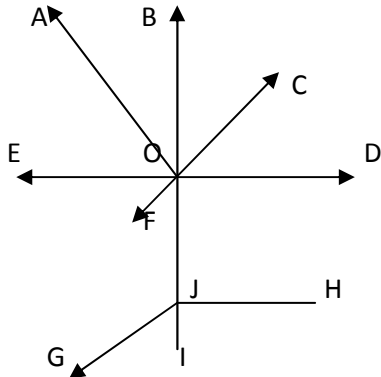
EJ is a \_\_\_\_\_



Student Name: \_\_\_\_\_

Score: \_\_\_\_\_

### Answers



OA is a **ray**

ED is a **line**

JH is a **line segment**

IB is a **ray**

CF is a **line**

OJ is a **line segment**

JG is a **ray**

OI is a **line segment**

OE is a **ray**

JI is a **line segment**

AN is a **ray**

LM is a **line**

KC is a **line segment**

DJ is a **ray**

HI is a **line**

DG is a **ray**

AF is a **line segment**

DH is a **ray**

AD is a **line segment**

EJ is a **line**

