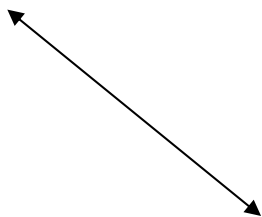


Student Name: _____

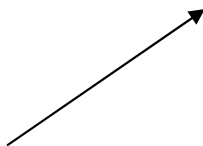
Score: _____

Line, Ray and Line Segment

State whether the following are line, ray or line segment:



Answer: _____




Answer: _____



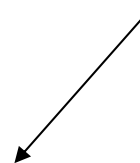
Answer: _____



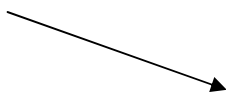
Answer: _____



Answer: _____



Answer: _____



Answer: _____



Answer: _____

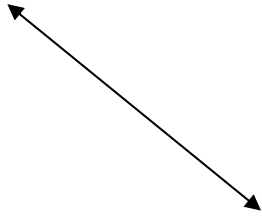


Answer: _____

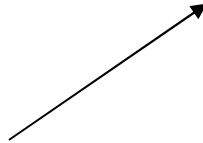
Student Name: _____

Score: _____

Answers



Line




Ray



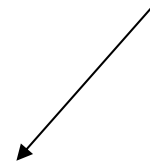
Line segment



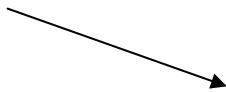
Line segment



Line



Ray



Ray



Line



Line segment