

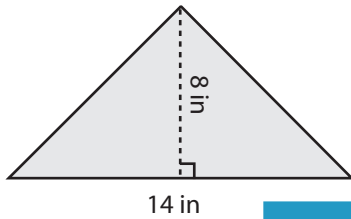
Name : \_\_\_\_\_

Triangle - Area

ES3

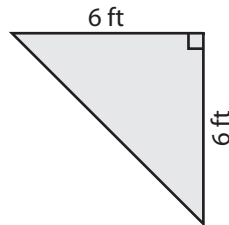
Find the area of each triangle.

1)



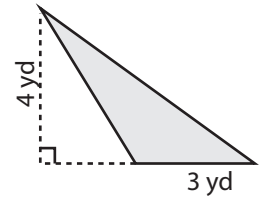
Area =

2)

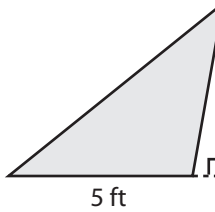


Area =

3)



4)



Area =

Access the largest collection of worksheets for just **\$19.95** per year!

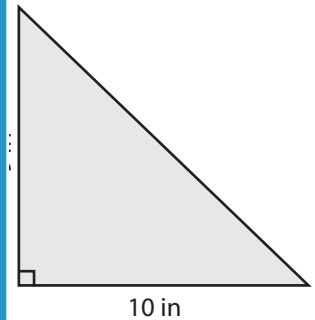
Members, please log in to download this worksheet.

**Log in**

Not a member? Please sign up to gain complete access.

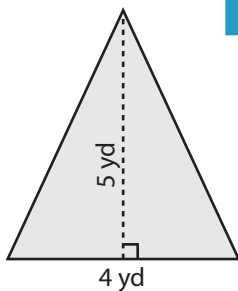
**Sign up**

[www.mathworksheets4kids.com](http://www.mathworksheets4kids.com)

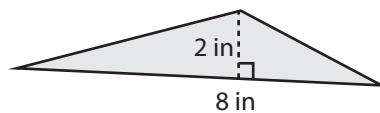


Area =

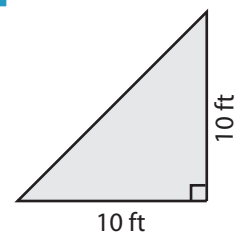
7)



Area =



Area =



Area =

Name : \_\_\_\_\_

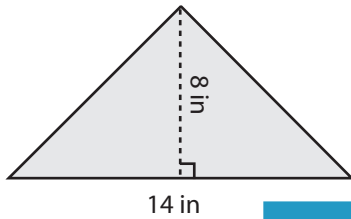
**Answer key**

**Triangle - Area**

ES3

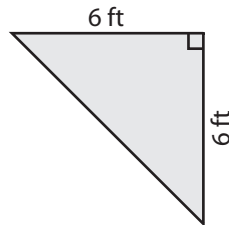
Find the area of each triangle.

1)



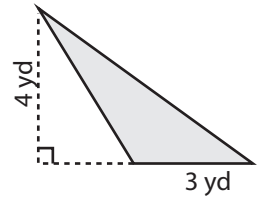
Area = **56 in<sup>2</sup>**

2)

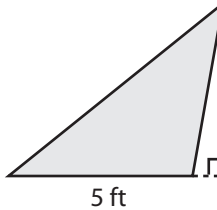


Area = **6 yd<sup>2</sup>**

3)



4)



Area = **10 ft<sup>2</sup>**

Access the largest collection of worksheets for just **\$19.95** per year!

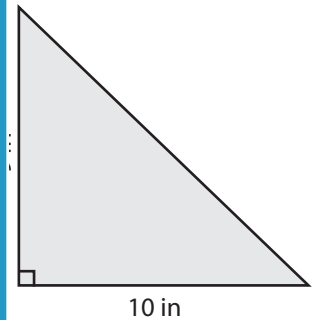
Members, please log in to download this worksheet.

**Log in**

Not a member? Please sign up to gain complete access.

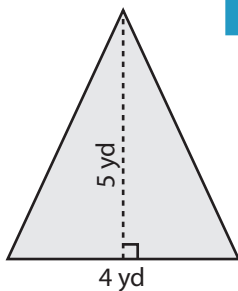
**Sign up**

[www.mathworksheets4kids.com](http://www.mathworksheets4kids.com)

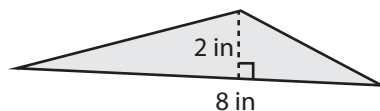


Area = **45 in<sup>2</sup>**

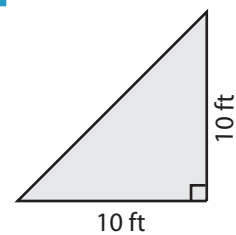
7)



Area = **10 yd<sup>2</sup>**



Area = **8 in<sup>2</sup>**



Area = **50 ft<sup>2</sup>**