

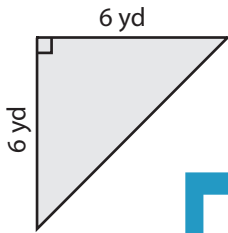
Name : _____

Triangle - Area

ES1

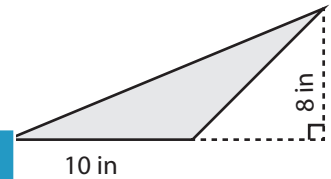
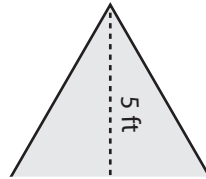
Find the area of each triangle.

1)



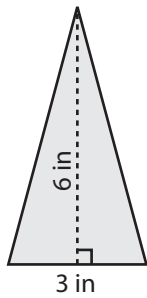
Area =

2)

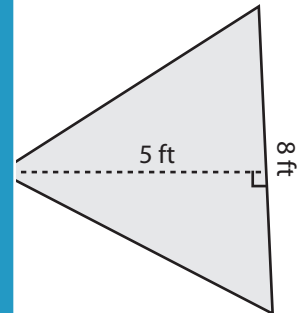


Area =

4)

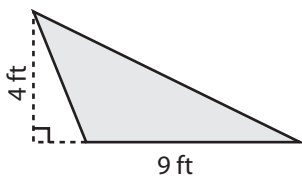


Area =

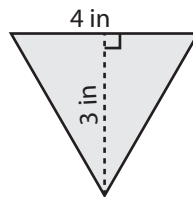


Area =

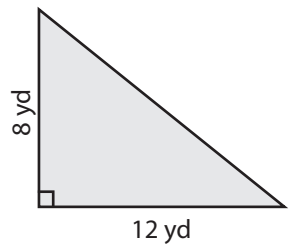
7)



Area =



Area =



Area =

PREVIEW

Access the largest collection of worksheets for just **\$19.95** per year!

Members, please log in to download this worksheet. **Log in**

Not a member? Please sign up to gain complete access. **Sign up**

www.mathworksheets4kids.com

Name : _____

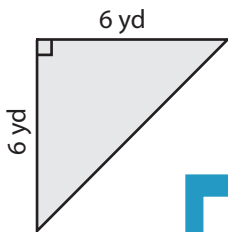
Answer key

Triangle - Area

ES1

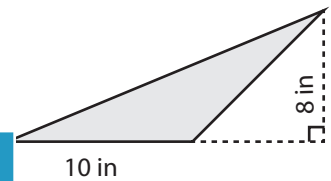
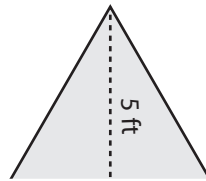
Find the area of each triangle.

1)



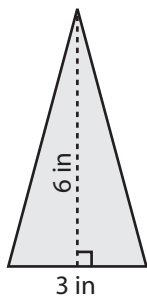
Area = **18 yd²**

2)

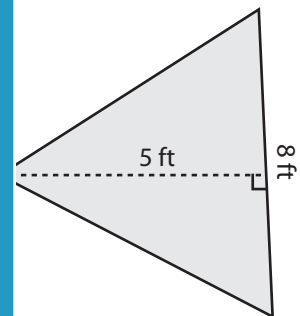


Area = **40 in²**

4)

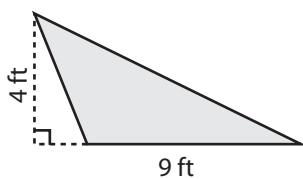


Area = **9 in²**

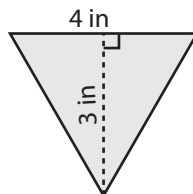


Area = **20 ft²**

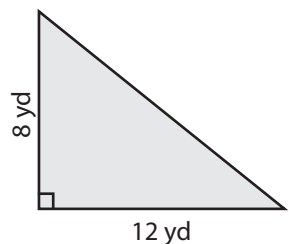
7)



Area = **18 ft²**



Area = **6 in²**



Area = **48 yd²**

PREVIEW

Access the largest collection of worksheets for just **\$19.95** per year!

Members, please log in to download this worksheet. **Log in**

Not a member? Please sign up to gain complete access. **Sign up**

www.mathworksheets4kids.com