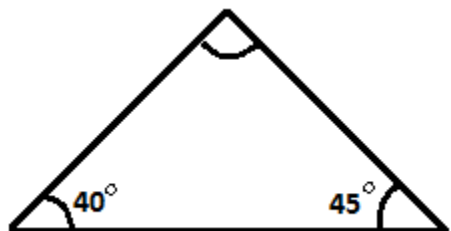


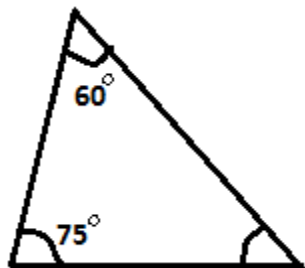
Student Name: \_\_\_\_\_

Score: \_\_\_\_\_

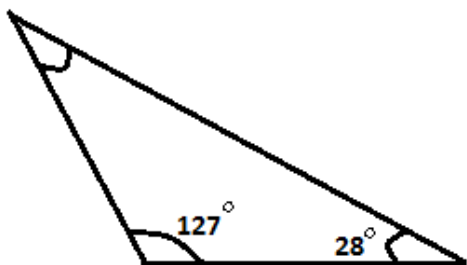
Find the missing angle of triangles



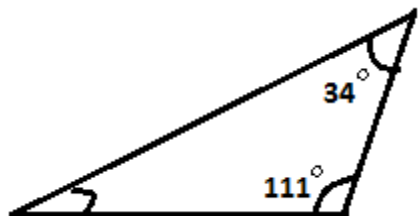
Missing Angle = \_\_\_\_\_



Missing Angle = \_\_\_\_\_



Missing Angle = \_\_\_\_\_

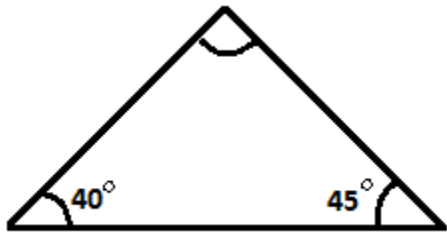


Missing Angle = \_\_\_\_\_

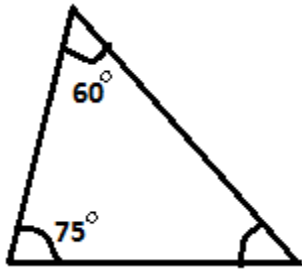
Student Name: \_\_\_\_\_

Score: \_\_\_\_\_

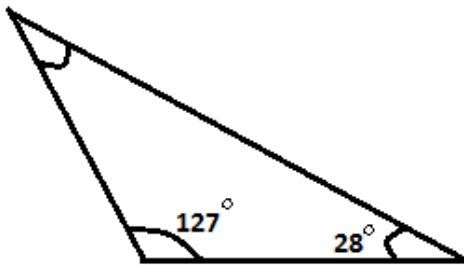
**Answers:**



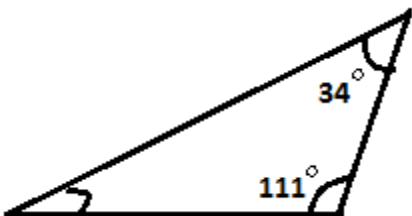
Missing Angle =  $95^\circ$



Missing Angle =  $45^\circ$



Missing Angle =  $25^\circ$



Missing Angle =  $35^\circ$