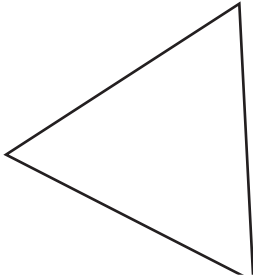


Name : _____

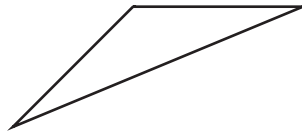
Identifying Triangles

Identify each triangle based on angles. (Acute, Obtuse or Right)


1)



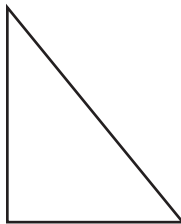
2)



3)



4)



PREVIEW

Access the largest collection of worksheets for just **\$19.95** per year!

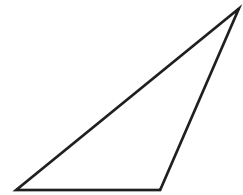
Members, please log in to download this worksheet.

Log in

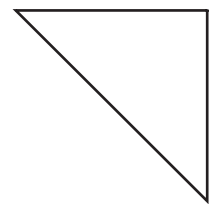
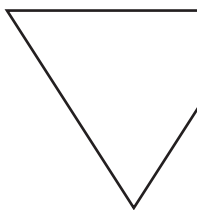
Not a member? Please sign up to gain complete access.

Sign up

www.mathworksheets4kids.com



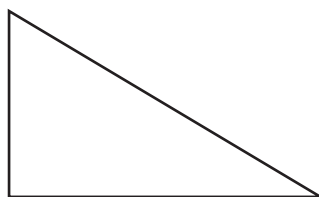
7)



10)



11)



12)



Name : _____

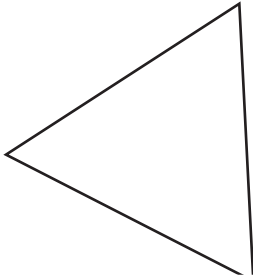
Answer key

Angles: S1

Identifying Triangles

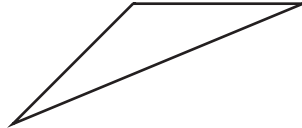
Identify each triangle based on angles. (Acute, Obtuse or Right)

1)




Acute triang

2)

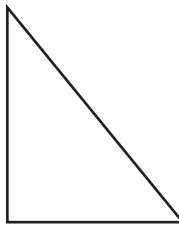


3)



Right triangle

4)



Right triangl

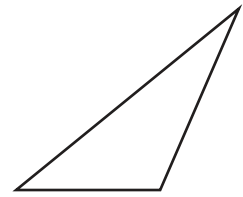
PREVIEW

Access the largest collection of worksheets for just **\$19.95** per year!

Members, please log in to download this worksheet. **Log in**

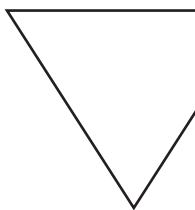
Not a member? Please sign up to gain complete access. **Sign up**

www.mathworksheets4kids.com

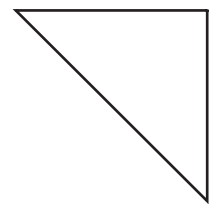


Obtuse triangle

7)



Acute triang



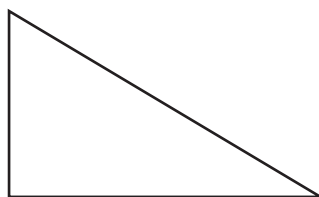
Right triangle

10)



Obtuse triangle

11)



Right triangle

12)



Acute triangle