

Student Name: \_\_\_\_\_

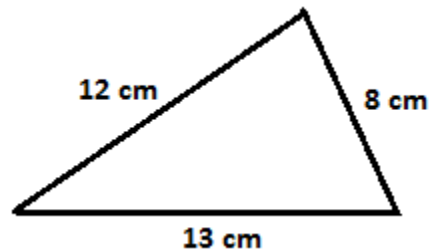
Score: \_\_\_\_\_

**Find the perimeter of triangles**

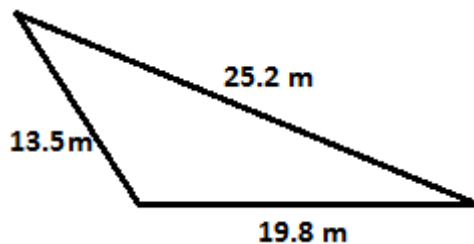
Work Space



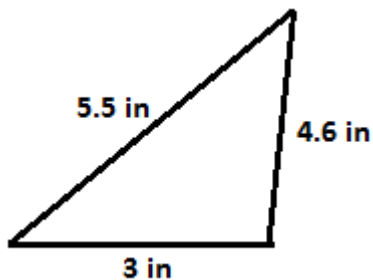
Perimeter = \_\_\_\_\_



Perimeter = \_\_\_\_\_



Perimeter = \_\_\_\_\_



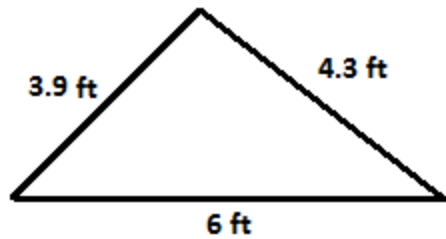
Perimeter = \_\_\_\_\_

Student Name: \_\_\_\_\_

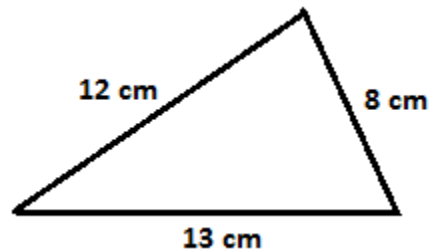
Score: \_\_\_\_\_

**Answers:**

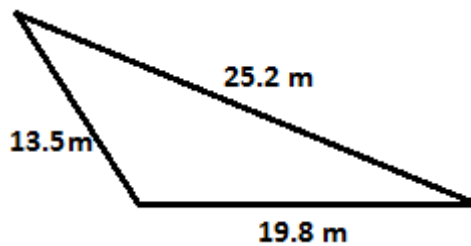
Work Space



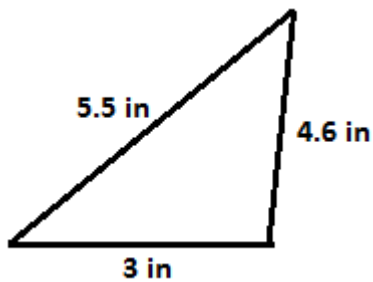
Perimeter = 14.2 ft



Perimeter = 33 cm



Perimeter = 58.5 m



Perimeter = 13.1 in