

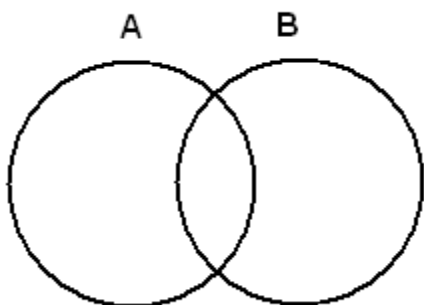
Student Name: \_\_\_\_\_

Score: \_\_\_\_\_

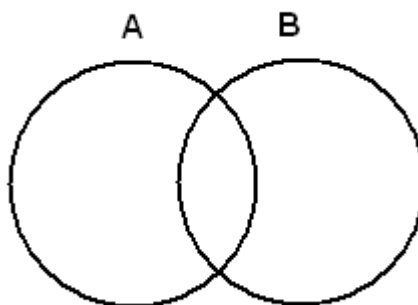
**Venn Diagram – Two Circles**

Shade the following in Venn diagram:

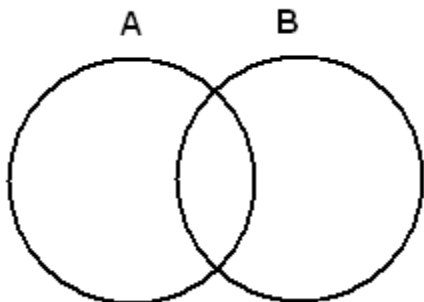
$$A \cup B$$



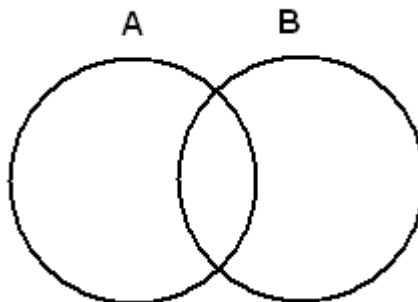
$$A \cap B$$



$$A - B$$



$$B - A$$

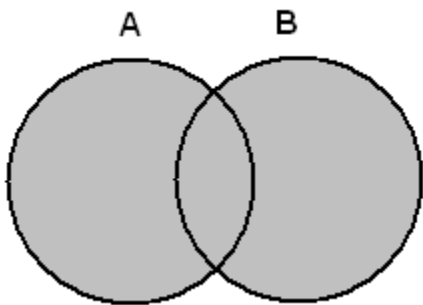


Student Name: \_\_\_\_\_

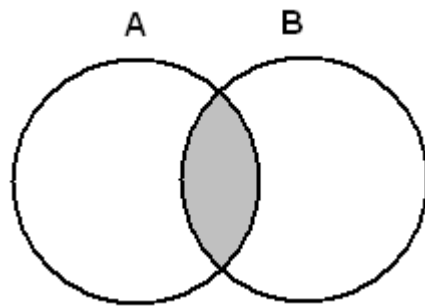
Score: \_\_\_\_\_

Shade the following in Venn diagram: (Answer)

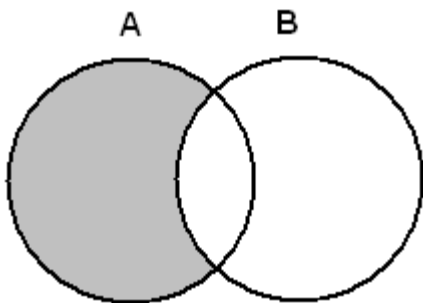
$A \cup B$



$A \cap B$



$A - B$



$B - A$

