

Name : \_\_\_\_\_

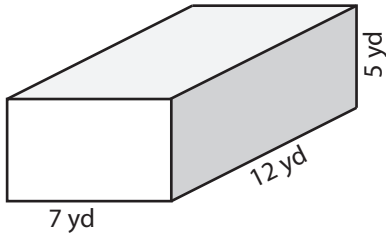
Score : \_\_\_\_\_

### Volume - Rectangular Prism

ES2

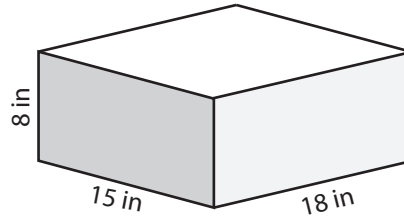
Find the volume of each rectangular prism.

1)



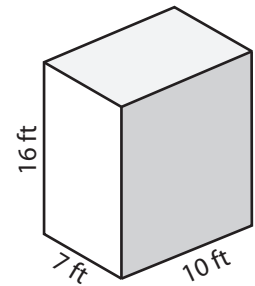
Volume = \_\_\_\_\_

2)



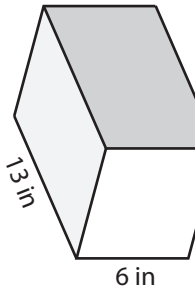
Volume = \_\_\_\_\_

3)



Volume = \_\_\_\_\_

4)



Volume = \_\_\_\_\_

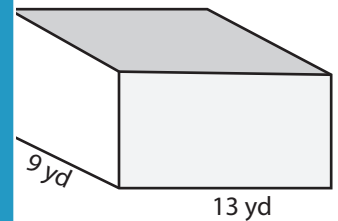
# PREVIEW

Access the largest collection of  
worksheets for just **\$19.95** per year!

Members, please  
log in to  
download this  
worksheet.  
Log in

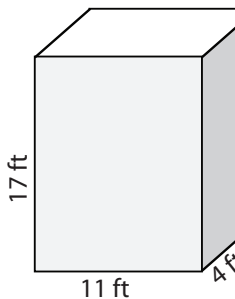
Not a member?  
Please sign up to  
gain complete  
access.  
Sign up

www.mathworksheets4kids.com

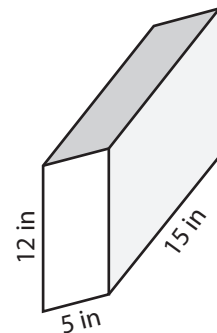


Volume = \_\_\_\_\_

7)



Volume = \_\_\_\_\_



Volume = \_\_\_\_\_

10) A fish-tank has a length of 45 yard, a width of 25 yard and a depth of 10 yard.  
Find the volume of the fish-tank.

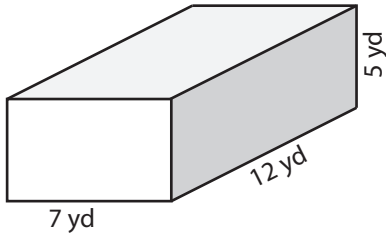
Volume = \_\_\_\_\_

**Volume - Rectangular Prism**

ES2

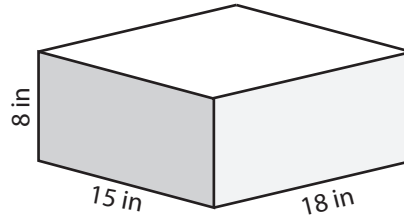
Find the volume of each rectangular prism.

1)



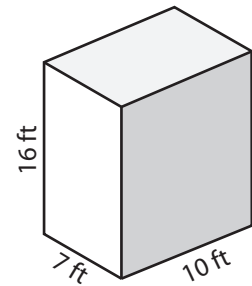
Volume = 420 yd<sup>3</sup>

2)



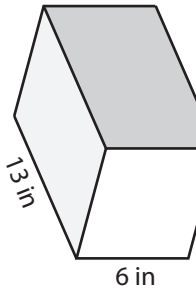
Volume = 2160 in<sup>3</sup>

3)



Volume = 1120 ft<sup>3</sup>

4)



Volume = 546 in<sup>3</sup>

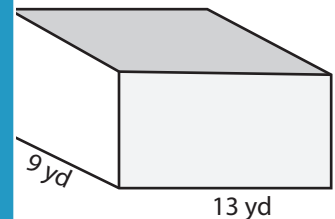
**PREVIEW**

Access the largest collection of  
worksheets for just **\$19.95** per year!

Members, please  
log in to  
download this  
worksheet.

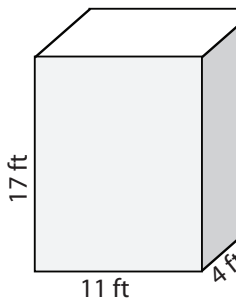
Not a member?  
Please sign up to  
gain complete  
access.

[www.mathworksheets4kids.com](http://www.mathworksheets4kids.com)



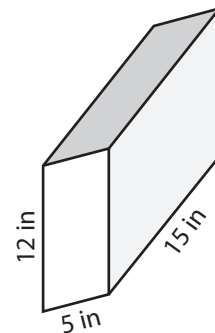
Volume = 1170 yd<sup>3</sup>

7)



Volume = 748 ft<sup>3</sup>

Volume = 72 yd<sup>3</sup>



Volume = 900 in<sup>3</sup>

- 10) A fish-tank has a length of 45 yard, a width of 25 yard and a depth of 10 yard.  
Find the volume of the fish-tank.

Volume = 11250 yd<sup>3</sup>