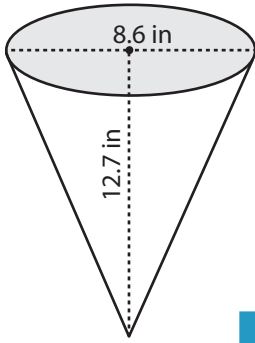


Volume of Pyramid

MS1

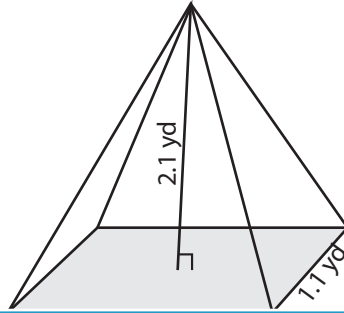
Find the volume of each pyramid. Round the answer to two decimal places.

1)

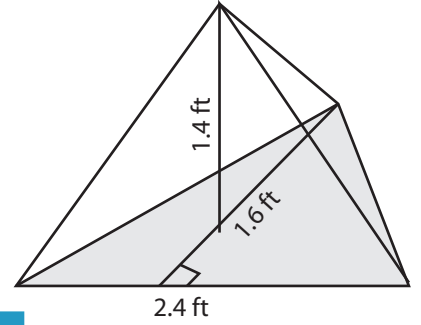


Volume = _____

2)

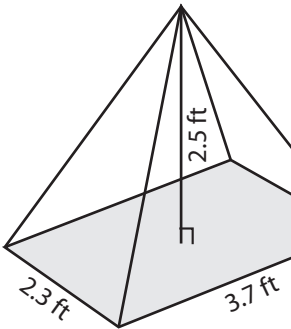


3)

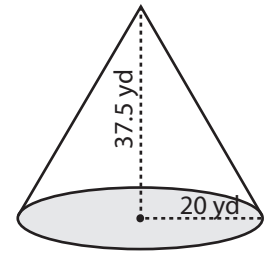


Volume = _____

4)

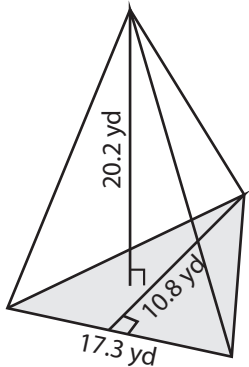


Volume = _____

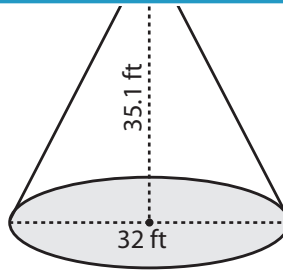


Volume = _____

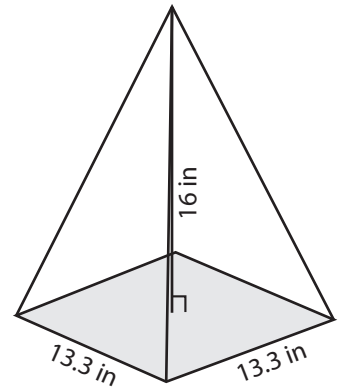
7)



Volume = _____



Volume = _____



Volume = _____

PREVIEW

Access the largest collection of worksheets for just **\$19.95** per year!

Members, please log in to download this worksheet.

Log in

Not a member? Please sign up to gain complete access.

Sign up

www.mathworksheets4kids.com

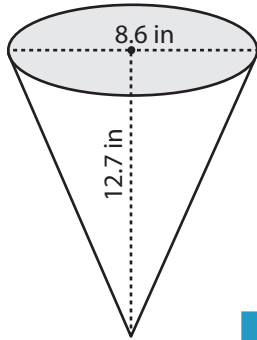
Answer Key

Volume of Pyramid

MS1

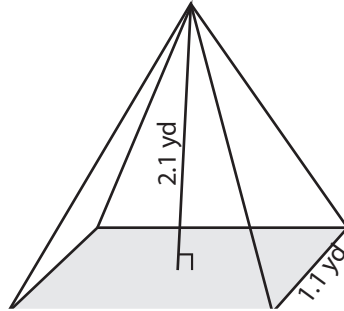
Find the volume of each pyramid. Round the answer to two decimal places.

1)

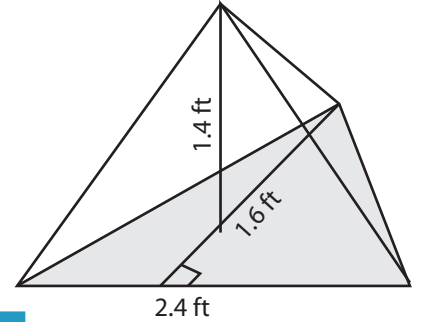


Volume = 245.78 in³

2)

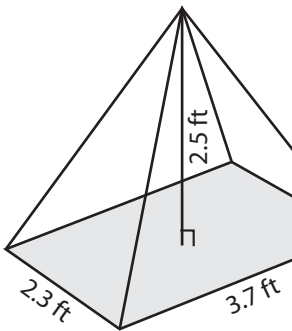


3)



Volume = 0.9 ft³

4)



Volume = 7.09 ft³

PREVIEW

Access the largest collection of worksheets for just **\$19.95** per year!

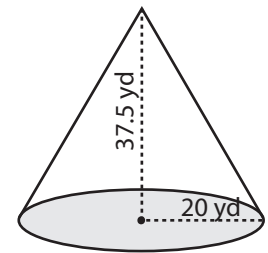
Members, please log in to download this worksheet.

Log in

Not a member? Please sign up to gain complete access.

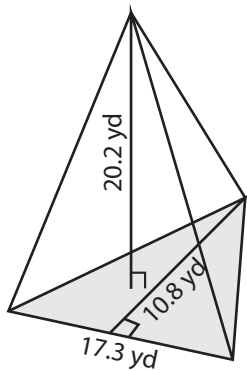
Sign up

www.mathworksheets4kids.com

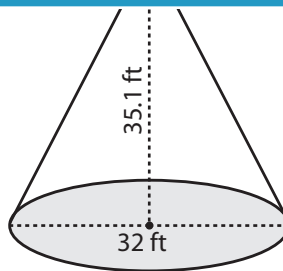


Volume = 15700 yd³

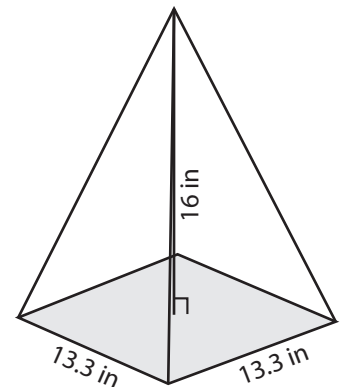
7)



Volume = 629.03 yd³



Volume = 9404.93 ft³



Volume = 943.41 in³