




**Weight Estimation - Metric Units**




Sheet 2

Choose the object close to the given weight.



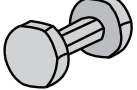
1) 1.5 kilograms

- 
- 
- 




2) 2 kilograms

- 
- 
- 




3) 2 grams

- 
- 
- 




4) 700 grams

- 
- 
- 

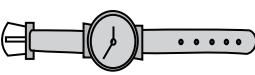

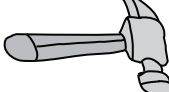
5) 15 grams

- 
- 
- 




6) 3.5 kilograms

- 
- 
- 

7) 1 kilogram

- 
- 
- 

8) 1 gram




- 
- 
- 

**Answer key****Weight Estimation - Metric Units**




Sheet 2

Choose the object close to the given weight.



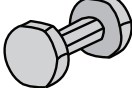
1) 1.5 kilograms

- 
- 
- 




2) 2 kilograms

- 
- 
- 




3) 2 grams

- 
- 
- 




4) 700 grams

- 
- 
- 

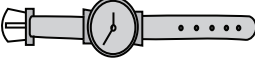

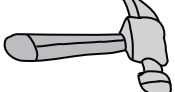
5) 15 grams

- 
- 
- 



6) 3.5 kilograms

- 
- 
- 

7) 1 kilogram

- 
- 
- 

8) 1 gram

- 
- 
- 