

Name : _____

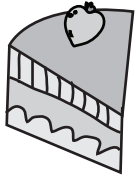
Score : _____

Weight Estimation

Customary Units: S1

Estimate the weight of each object.

1)




- 4 lb
- 40 oz
- 4 oz

2)



- 10 oz
- 1 oz
- 10 lb

3)



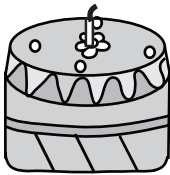
- 50 lb
- 5 lb
- 5 oz

4)



- 9 lb
- 90 oz
- 9 oz

5)



- 7 oz
- 7 lb
- 70 lb

6)



- 30 lb
- 3 lb
- 3 oz

7)



- 6 oz
- 60 oz
- 6 lb

8)



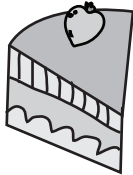
- 20 oz
- 2 oz
- 20 lb

Weight Estimation

Customary Units: S1

Estimate the weight of each object.

1)




- 4 lb
- 40 oz
- **4 oz**

2)



- **10 oz**
- 1 oz
- 10 lb

3)



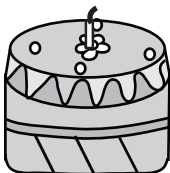
- 50 lb
- **5 lb**
- 5 oz

4)



- 9 lb
- 90 oz
- **9 oz**

5)



- 7 oz
- **7 lb**
- 70 lb

6)



- 30 lb
- **3 lb**
- 3 oz

7)



- **6 oz**
- 60 oz
- 6 lb

8)



- **20 oz**
- 2 oz
- 20 lb