

Name : _____

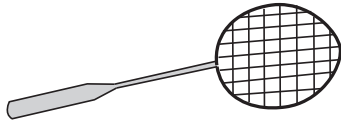
Score : _____

Weight Estimation

Customary Units: S2

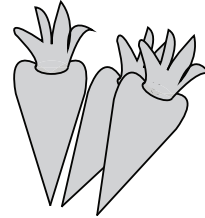
Estimate the weight of each object.

1)



- 12 oz
- 120 oz
- 12 lb

2)



- 80 oz
- 8 oz
- 8 lb

3)



- 20 lb
- 2 oz
- 2 lb

4)




- 10 oz
- 1 oz
- 1 lb

5)




- 30 lb
- 3 lb
- 3 oz

6)



- 4 lb
- 4 oz
- 40 lb

7)



- 10 oz
- 1 lb
- 1 oz

8)



- 15 oz
- 150 oz
- 15 lb

Name : _____

Score : _____

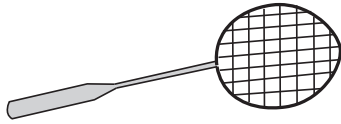
Answer key

Weight Estimation

Customary Units: S2

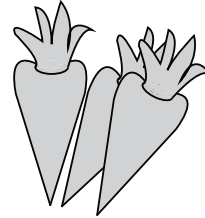
Estimate the weight of each object.

1)



- **12 oz**
- 120 oz
- 12 lb

2)



- 80 oz
- **8 oz**
- 8 lb

3)



- 20 lb
- 2 oz
- **2 lb**

4)




- 10 oz
- **1 oz**
- 1 lb

5)




- 30 lb
- 3 lb
- **3 oz**

6)



- **4 lb**
- 4 oz
- 40 lb

7)



- 10 oz
- **1 lb**
- 1 oz

8)



- **15 oz**
- 150 oz
- 15 lb