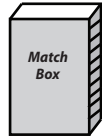


Weight Estimation

Metric Units: S2

Estimate the weight of each object.

1)



- 4 g
- 400 g
- 40 g

2)




- 2 kg
- 200 g
- 20 g

3)



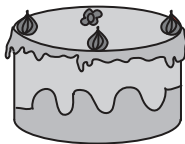
- 2 kg
- 20 g
- 200 g

4)



- 150 g
- 5 kg
- 50 kg

5)



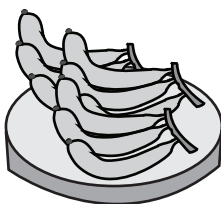
- 3 kg
- 30 g
- 300 g

6)



- 500 g
- 5 g
- 50 g

7)



- 25 g
- 250 g
- 2.5 kg

8)



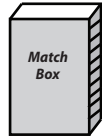
- 20 g
- 2 g
- 200 g

Answer key**Weight Estimation**

Metric Units: S2

Estimate the weight of each object.

1)



- 4 g
- 400 g
- **40 g**

2)




- **2 kg**
- 200 g
- 20 g

3)



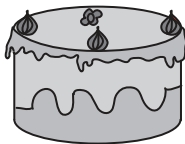
- 2 kg
- **20 g**
- 200 g

4)



- **150 g**
- 5 kg
- 50 kg

5)



- **3 kg**
- 30 g
- 300 g

6)



- 500 g
- **5 g**
- 50 g

7)



- 25 g
- 250 g
- **2.5 kg**

8)



- 20 g
- **2 g**
- 200 g