

Weight Estimation

Metric Units: S3


Estimate the weight of each object.

1)



- 1 kg
- 100 g
- 10 g

2)



- 7 kg
- 7 g
- 70 g

3)



- 6 g
- 60 g
- 6 kg

4)



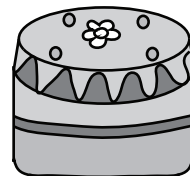
- 800 g
- 8 g
- 8 kg

5)



- 200 g
- 2 kg
- 20 g

6)




- 4 g
- 4 kg
- 40 g

7)



- 2 g
- 20 g
- 2 kg

8)



- 50 g
- 5 g
- 500 g

Answer key**Weight Estimation**

Metric Units: S3


Estimate the weight of each object.

1)



- **1 kg**
- 100 g
- 10 g

2)



- 7 kg
- 7 g
- **70 g**

3)



- 6 g
- **60 g**
- 6 kg

4)



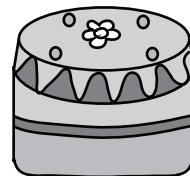
- **800 g**
- 8 g
- 8 kg

5)



- **200 g**
- 2 kg
- 20 g

6)




- 4 g
- **4 kg**
- 40 g

7)



- 2 g
- 20 g
- **2 kg**

8)



- **50 g**
- 5 g
- 500 g