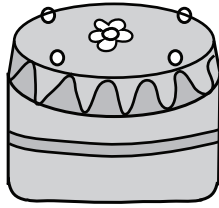


Weight - More/Less


Metric Units: S1

Choose the correct choice that describes the weight of each object.

1)

 More than 100 g Less than 100 g

2)

 More than 250 g Less than 250 g


3)

 More than 10 kg Less than 10 kg

4)

 More than 3 g Less than 3 g

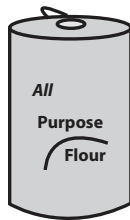
5)

 More than 500 g Less than 500 g

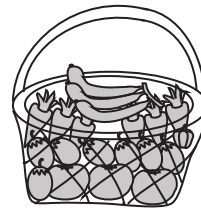
6)

 More than 2 kg Less than 2 kg


7)

 More than 150 g Less than 150 g

8)

 More than 20 kg Less than 20 kg

9)

 More than 25 g Less than 25 g

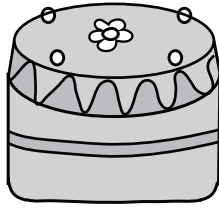
10)

 More than 750 g Less than 750 g


Weight - More/Less

Choose the correct choice that describes the weight of each object.

1)

 More than 100 g Less than 100 g

2)

 More than 250 g Less than 250 g


3)

 More than 10 kg Less than 10 kg

4)

 More than 3 g Less than 3 g

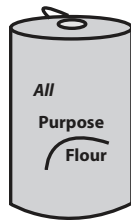
5)

 More than 500 g Less than 500 g

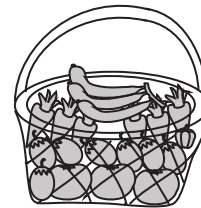
6)

 More than 2 kg Less than 2 kg


7)

 More than 150 g Less than 150 g

8)

 More than 20 kg Less than 20 kg

9)

 More than 25 g Less than 25 g

10)

 More than 750 g Less than 750 g