

**Weight - More/Less**


Metric Units: S2

Choose the correct choice that describes the weight of each object.

1)

 More than 3 kg     Less than 3 kg

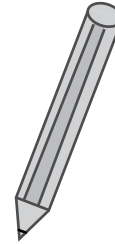
2)

 More than 20 g     Less than 20 g


3)

 More than 1 kg     Less than 1 kg


4)

 More than 150 g     Less than 150 g


5)

 More than 30 g     Less than 30 g

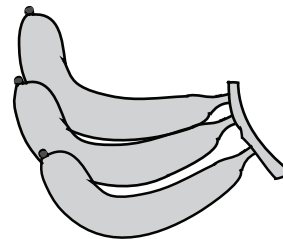
6)

 More than 50 g     Less than 50 g

7)

 More than 200 g     Less than 200 g

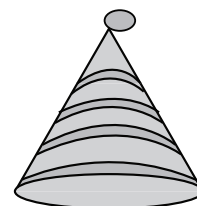
8)

 More than 5 kg     Less than 5 kg

9)

 More than 25 g     Less than 25 g

10)

 More than 2 kg     Less than 2 kg

**Weight - More/Less**


Metric Units: S2

Choose the correct choice that describes the weight of each object.

1)

 More than 3 kg     Less than 3 kg

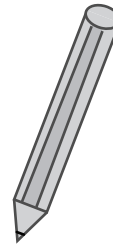
2)

 More than 20 g     Less than 20 g


3)

 More than 1 kg     Less than 1 kg


4)

 More than 150 g     Less than 150 g


5)

 More than 30 g     Less than 30 g

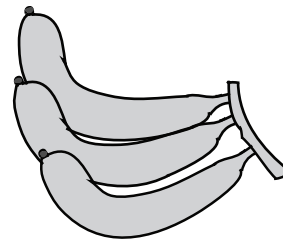
6)

 More than 50 g     Less than 50 g

7)

 More than 200 g     Less than 200 g

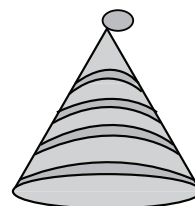
8)

 More than 5 kg     Less than 5 kg

9)

 More than 25 g     Less than 25 g

10)

 More than 2 kg     Less than 2 kg