

**Weight - More/Less**

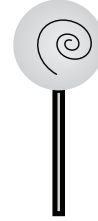
Metric Units: S3

Choose the correct choice that describes the weight of each object.


1)

 More than 10 kg     Less than 10 kg


2)

 More than 250 g     Less than 250 g

3)

 More than 1 kg     Less than 1 kg

4)

 More than 2 kg     Less than 2 kg


5)

 More than 20 g     Less than 20 g

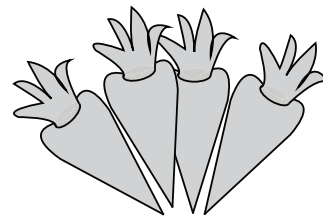
6)

 More than 10 g     Less than 10 g


7)

 More than 5 kg     Less than 5 kg

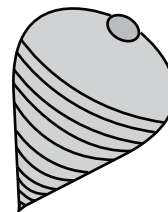
8)

 More than 100 g     Less than 100 g

9)

 More than 700 g     Less than 700 g

10)

 More than 5 g     Less than 5 g

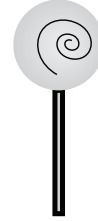
**Weight - More/Less**

Choose the correct choice that describes the weight of each object.

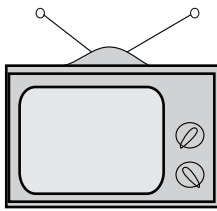
1)

 More than 10 kg     Less than 10 kg


2)

 More than 250 g     Less than 250 g

3)

 More than 1 kg     Less than 1 kg

4)

 More than 2 kg     Less than 2 kg


5)

 More than 20 g     Less than 20 g

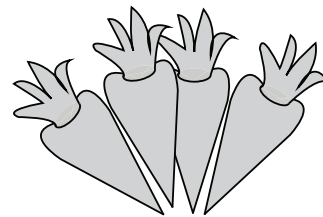
6)

 More than 10 g     Less than 10 g


7)

 More than 5 kg     Less than 5 kg

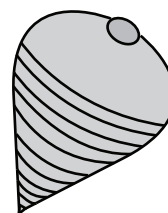
8)

 More than 100 g     Less than 100 g

9)

 More than 700 g     Less than 700 g

10)

 More than 5 g     Less than 5 g