


Counting up to 20

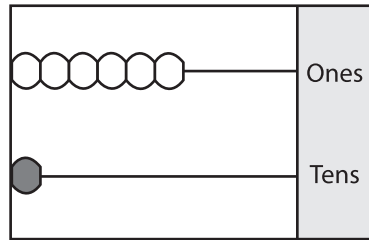
Sheet 3

Write the number formed by each abacus.

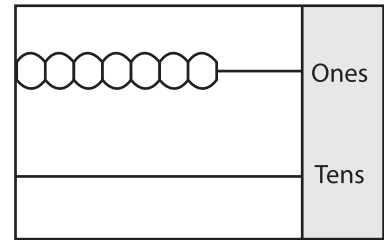
1)



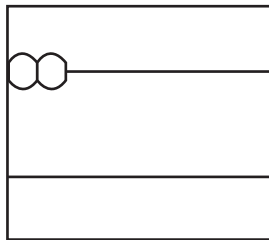
2)



3)



4)



PREVIEW

Gain complete access to the largest collection of worksheets in all subjects!

Members, please log in to download this worksheet.

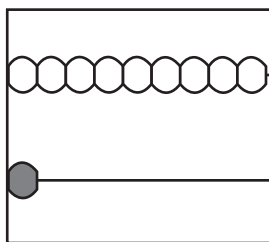
Not a member? Please sign up to gain complete access.

www.mathworksheets4kids.com

Ones

Tens

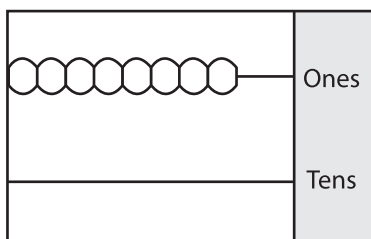
7)



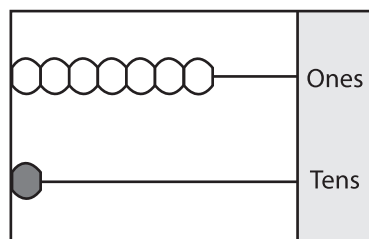
Ones

Tens

10)



11)



12)

