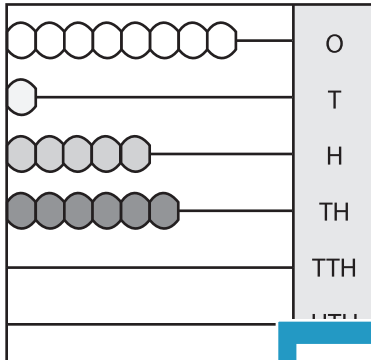


**Place Value - Abacus**

L2S4

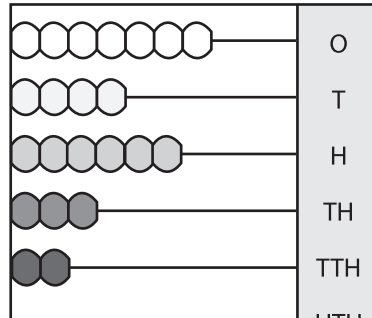
Write the number formed by each abacus.

1)



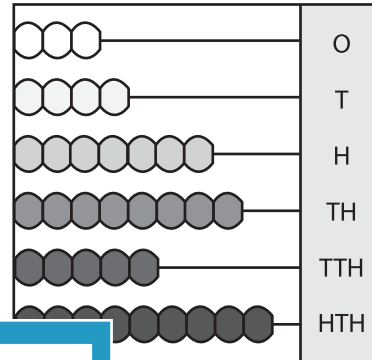
\_\_\_\_\_

2)



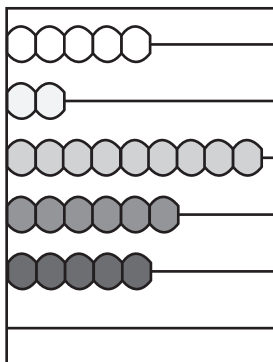
\_\_\_\_\_

3)

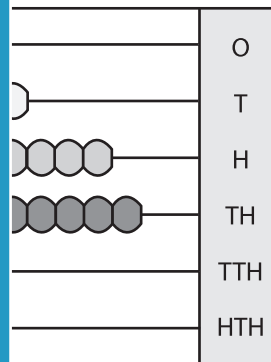


\_\_\_\_\_

4)

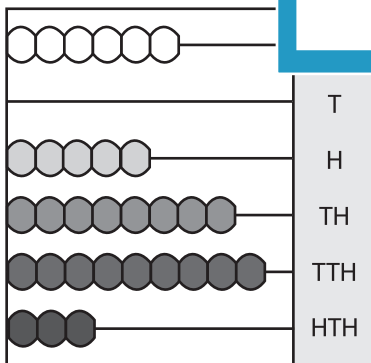


\_\_\_\_\_

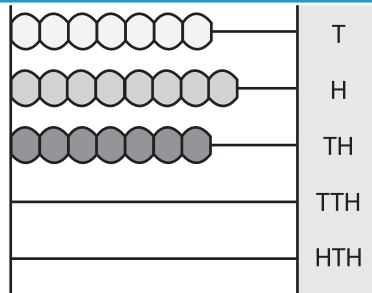


\_\_\_\_\_

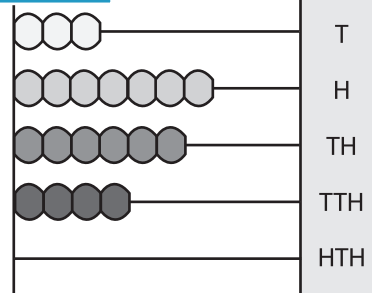
7)



\_\_\_\_\_



\_\_\_\_\_



\_\_\_\_\_

# PREVIEW

Gain complete access to the largest collection of worksheets in all subjects!

Members, please log in to download this worksheet.

Not a member? Please sign up to gain complete access.

[www.mathworksheets4kids.com](http://www.mathworksheets4kids.com)