

Name: _____

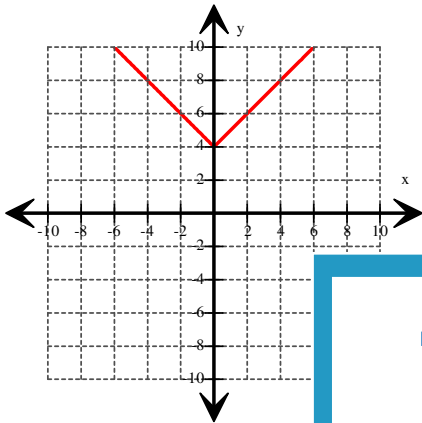
Score: _____

Identify the Absolute Value Function

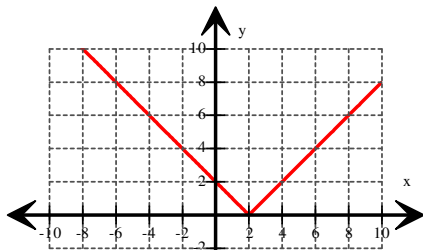
ES2

A graph of absolute value function is shown in each question. Find the function.

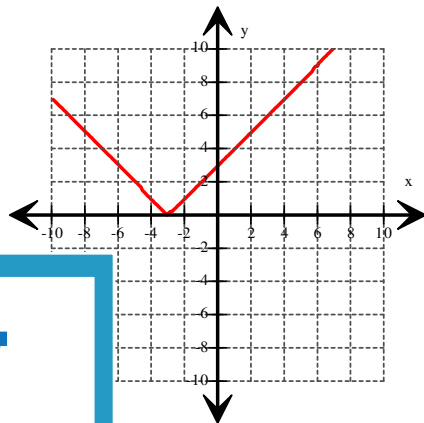
1) $f(x) =$



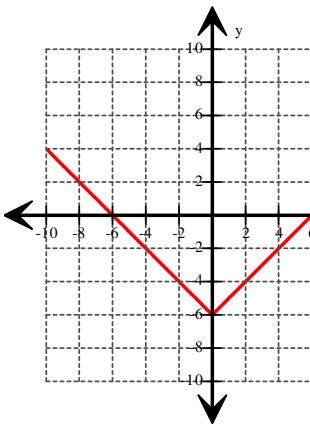
2) $f(x) =$



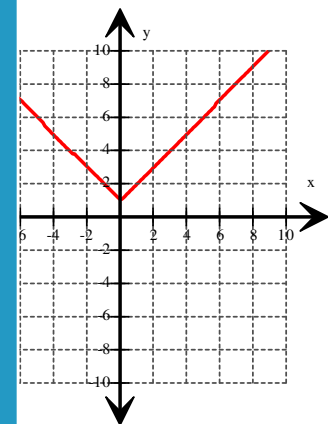
3) $f(x) =$



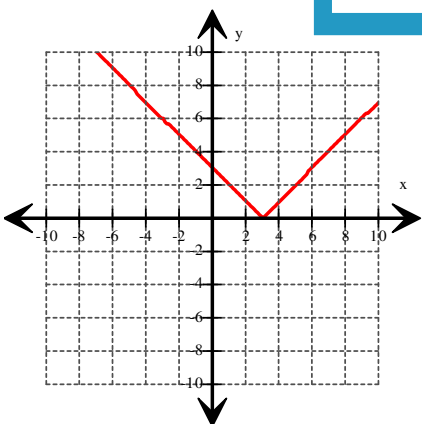
4) $f(x) =$



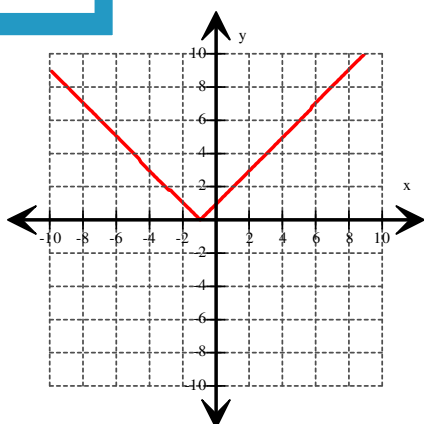
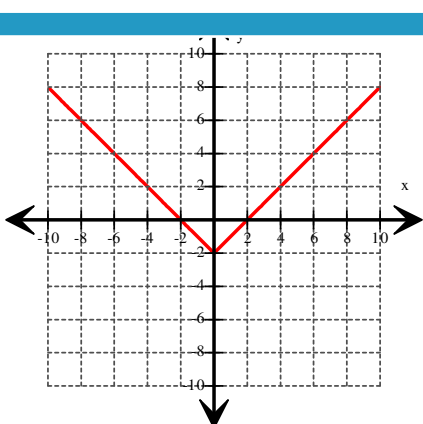
$f(x) =$



7) $f(x) =$



$f(x) =$



PREVIEW

Gain complete access to the largest collection of worksheets in all subjects!

Members, please log in to download this worksheet.

Not a member? Please sign up to gain complete access.

www.mathworksheets4kids.com

Name: _____

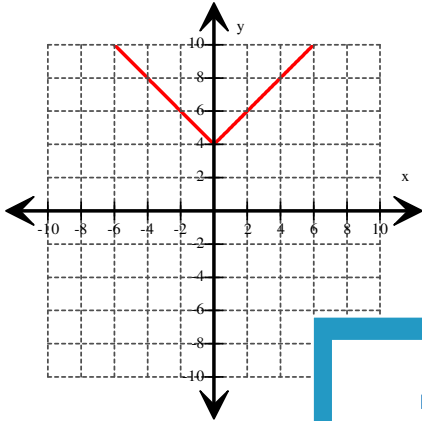
Score: _____

Identify the Absolute Value Function

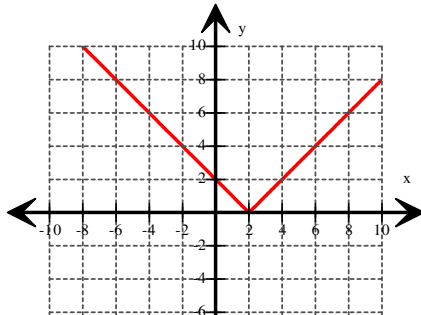
ES2

Answers:

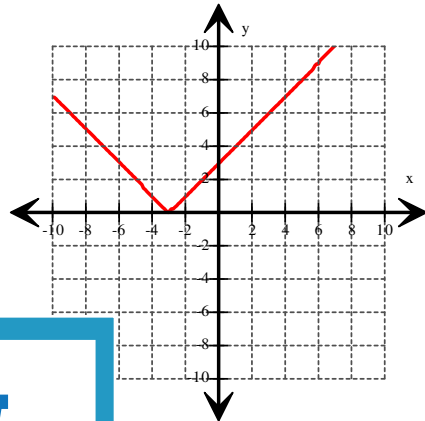
1) $f(x) = |x| + 4$



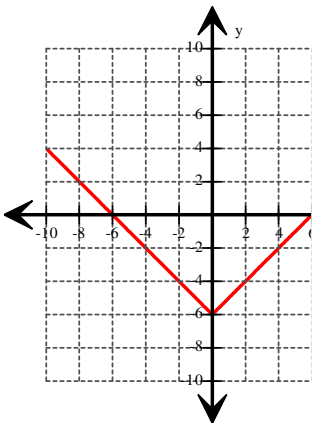
2) $f(x) = |x - 2|$



3) $f(x) = |x + 3|$



4) $f(x) = |x| - 6$



PREVIEW

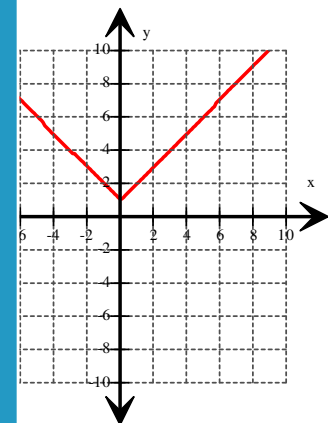
Gain complete access to the largest collection of worksheets in all subjects!

Members, please log in to download this worksheet.

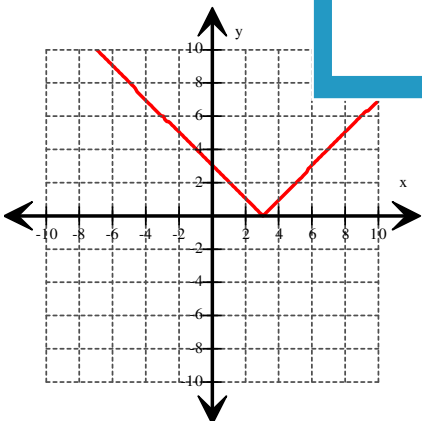
Not a member? Please sign up to gain complete access.

www.mathworksheets4kids.com

$f(x) = |x| + 1$



7) $f(x) = |x - 3|$



$f(x) = |x + 1|$

