

Name : \_\_\_\_\_

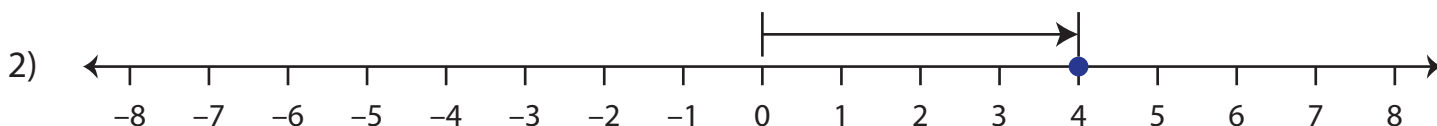
## Absolute Value

Sheet 1

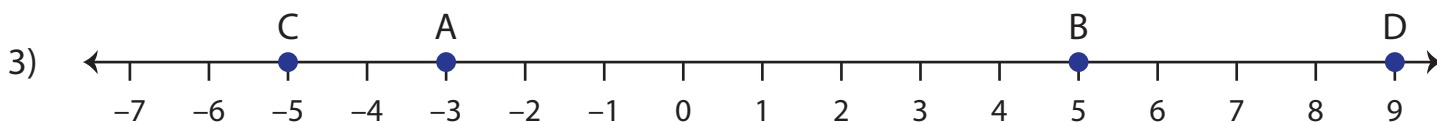
Read each number line and find the absolute value.



Absolute value of  $-11$  is \_\_\_\_\_.



Absolute value of  $4$  is \_\_\_\_\_.



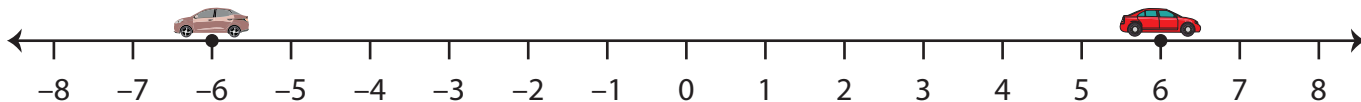
Absolute value of  $A$  is \_\_\_\_\_.

Absolute value of  $B$  is \_\_\_\_\_.

Absolute value of  $C$  is \_\_\_\_\_.

Absolute value of  $D$  is \_\_\_\_\_.

- 4) Two cars start from the same point (0) and travel in opposite directions. One car travels 6 miles east (+6), while the other travels 6 miles west ( $-6$ ). How far is each car from the starting point?



Absolute value of  $+6$  is \_\_\_\_\_.

Absolute value of  $-6$  is \_\_\_\_\_.