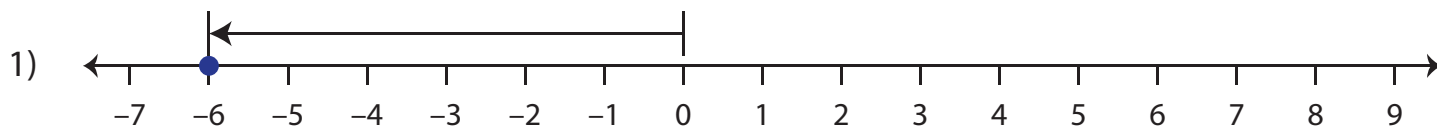


Name : \_\_\_\_\_

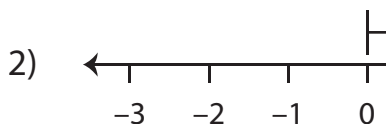
## Absolute Value

Sheet 3

Read each number line and find the absolute value.



Absolute value of -6 is \_\_\_\_\_.



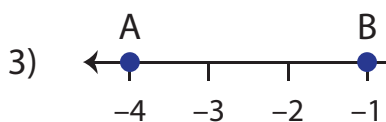
# PREVIEW

Gain complete access to the largest  
collection of worksheets in all subjects!

Members, please  
log in to  
download this  
worksheet.

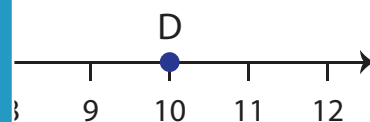
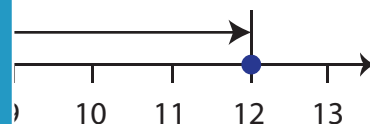
Not a member?  
Please sign up to  
gain complete  
access.

[www.mathworksheets4kids.com](http://www.mathworksheets4kids.com)



Absolute value of A is \_\_\_\_\_.

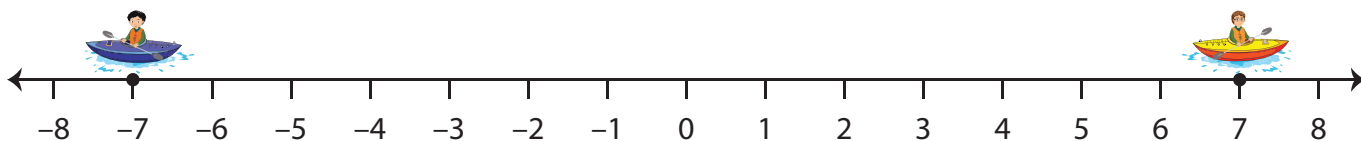
Absolute value of B is \_\_\_\_\_.



Absolute value of D is \_\_\_\_\_.

- 4) Two kayakers begin at 0 on a number line. Kayaker A paddles 7 miles east (+7), while Kayaker B paddles 7 miles west (-7). What is the distance of each kayaker from the starting point?

Kayaker A paddles 7 miles east. What is the distance of Kayaker B from the starting point?



Absolute value of +7 is \_\_\_\_\_.

Absolute value of -7 is \_\_\_\_\_.