

Name : \_\_\_\_\_

## Two-Digit Addition & Subtraction


No Regrouping: S2

- 1) Jacqueline buys 31 cartons of milk every month. She bought 53 cartons of milk this month. How many more cartons of milk did Jacqueline buy this month than last month?



\_\_\_\_\_

- 2) Pierce sold 33 pairs of woolen gloves in the first week. He sold 45 pairs of gloves in the second week. How many pairs of gloves did Pierce sell in all?



\_\_\_\_\_

- 3) Ms. Anderson, an \_\_\_\_\_ grade 41 essays. \_\_\_\_\_ She managed to

Gain complete access to the largest collection of worksheets in all subjects!

Members, please log in to download this worksheet.

Not a member? Please sign up to gain complete access.

[www.mathworksheets4kids.com](http://www.mathworksheets4kids.com)




\_\_\_\_\_

- 4) Ariel's Arts Club had \_\_\_\_\_ new members who joined this year. \_\_\_\_\_?



\_\_\_\_\_

- 5) Mr. Turner picked 90 red and green tomatoes from his vegetable garden. If he had 80 green tomatoes, how many red tomatoes did he pick?



\_\_\_\_\_

**Two-Digit Addition & Subtraction**

- 1) Jacqueline buys 31 cartons of milk every month. She bought 53 cartons of milk this month. How many more cartons of milk did Jacqueline buy this month than last month?

**22 cartons**


---



- 2) Pierce sold 33 pairs of woolen gloves in the first week. He sold 45 pairs of gloves in the second week. How many pairs of gloves did Pierce sell in all?

**78 pairs**

---



- 3) Ms. Anderson, an 8th grade teacher, wrote 17 essays for a contest. She managed to

**Gain complete access to the largest collection of worksheets in all subjects!**

**17 e**

---

Members, please log in to download this worksheet.

Not a member? Please sign up to gain complete access.

[www.mathworksheets4kids.com](http://www.mathworksheets4kids.com)



- 4) Ariel's Arts Club had 37 new members who joined this year. How many members were there in all?

**37 members**

---



- 5) Mr. Turner picked 90 red and green tomatoes from his vegetable garden. If he had 80 green tomatoes, how many red tomatoes did he pick?

**10 red tomatoes**

---

