

Name : _____

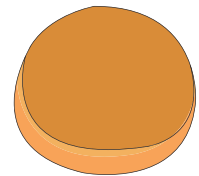
Two-Digit Addition & Subtraction

No Regrouping: S3

- 1) Sadie owns a small flower shop. Today, she sold 38 white roses and 41 pink roses. How many roses, white and pink, were sold today?



- 2) Martin works at a bakery. This morning, he bakes 64 batches of burger buns. If he has sold 22 batches. how many batches of buns are left?




- 3) If 18 pieces go missing from a puzzle, how many pieces are left? What is the number of puzzle pieces that remain?

Gain complete access to the largest collection of worksheets in all subjects!

Members, please log in to download this worksheet.

Not a member? Please sign up to gain complete access.



- 4) A travel enthusiast visits 12 places from London. How many more places does she love to visit. If she has visited 5 places?

www.mathworksheets4kids.com



- 5) A talented sketch artist, Stuart has 55 animal sketches and 43 human sketches in his collection. What is the total number of sketches?



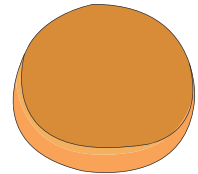
Two-Digit Addition & Subtraction

No Regrouping: S3

- 1) Sadie owns a small flower shop. Today, she sold 38 white roses and 41 pink roses. How many roses, white and pink, were sold today?

79 roses

- 2) Martin works at a bakery. This morning, he bakes 64 batches of burger buns. If he has sold 22 batches. how many batches of buns are left?

42 batches**PREVIEW**

- 3) If 18 pieces go missing from a 100-piece puzzle, how many pieces are left? What is the number of puzzle pieces that remain?


81 pieces

Gain complete access to the largest collection of worksheets in all subjects!

What is the number of puzzle pieces that remain?

Members, please log in to download this worksheet.

Not a member? Please sign up to gain complete access.



- 4) A travel enthusiast visits 12 places from a list of 29 places. How many places does she still have to visit? How many places does she still have to visit? How many places does she still have to visit?

17 places

www.mathworksheets4kids.com

How many places does she still have to visit? How many places does she still have to visit? How many places does she still have to visit?



- 5) A talented sketch artist, Stuart has 55 animal sketches and 43 human sketches in his collection. What is the total number of sketches?

98 sketches