

Name : _____


Two-Digit Addition & Subtraction

Regrouping: S3

- 1) Janet's assignment has 40 word problems. Today, she solved 16 problems. How many more problems will Janet need to solve to complete the assignment?



- 2) There were 94 Halloween masks at the store. If 85 masks were sold, how many masks were left?

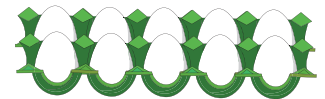


- 3) Walter is hosting a party and has 57 chicken eggs and 25 duck eggs. How many eggs does he have in total?

Gain complete access to the largest collection of worksheets in all subjects!

Members, please log in to download this worksheet.

Not a member? Please sign up to gain complete access.



- 4) There are 31 cypress trees on one side of Ever Street. How many trees are there on the other side?

www.mathworksheets4kids.com

aver Street. How



- 5) Rebecca was practicing on an archery range. She shot 63 arrows. If 48 arrows missed the target, how many arrows hit the target?



Two-Digit Addition & Subtraction


- 1) Janet's assignment has 40 word problems. Today, she solved 16 problems. How many more problems will Janet need to solve to complete the assignment?

24 problems



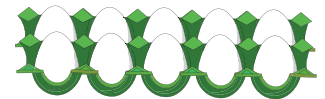
- 2) There were 94 Halloween masks at the store. If 85 masks were sold, how many masks were left?

9 m



- 3) Walter is hosting a party and needs 57 chicken eggs and 25 duck eggs. How many eggs does he need?

82 e



- 4) There are 31 cypress trees on Maple Street. How many trees are there in total?

50 trees



- 5) Rebecca was practicing on an archery range. She shot 63 arrows. If 48 arrows missed the target, how many arrows hit the target?

15 arrows



PREVIEW

Gain complete access to the largest collection of worksheets in all subjects!

Members, please log in to download this worksheet.

Not a member? Please sign up to gain complete access.

www.mathworksheets4kids.com