

Three-Digit Addition & Subtraction

- 1) Tamara drives 320 miles to her sister's house and another 140 miles from there to her brother's house. What is the total distance Tamara covers?



- 2) Farmer Bill has 657 cows and 121 goats in his farm. How many cows and goats does he keep in all?




- 3) A concert hall has _____ seats, with 709 seats occupied, how many seats are left?

Gain complete access to the largest collection of worksheets in all subjects!


Members, please log in to download this worksheet.

Not a member? Please sign up to gain complete access.

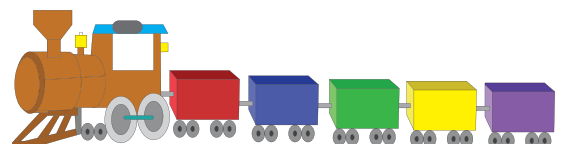


- 4) Joe's Electronic Store sold 456 smartphones last month, 45% of the 578 devices were laptops, how many tablets were sold in the month?

www.mathworksheets4kids.com



- 5) Jane's dad buys her a huge teddy bear for \$143 and a train set for \$198. How much money does Dad spend in all?



Three-Digit Addition & Subtraction

- 1) Tamara drives 320 miles to her sister's house and another 140 miles from there to her brother's house. What is the total distance Tamara covers?

460 miles



- 2) Farmer Bill has 657 cows and 121 goats in his farm. How many cows and goats does he keep in all?

778 cows



- 3) A concert hall has 709 seats. If 430 seats are occupied, how many seats are left?


275

PREVIEW
Gain complete access to the largest collection of worksheets in all subjects!

Members, please log in to download this worksheet.


Not a member? Please sign up to gain complete access.

www.mathworksheets4kids.com



- 4) Joe's Electronic Store sold 578 devices last month, 435 of which were smartphones. How many laptops were sold in the month?

143 laptops



- 5) Jane's dad buys her a huge teddy bear for \$143 and a train set for \$198. How much money does Dad spend in all?

\$341

