


## Three-Digit & Two-Digit Addition & Subtraction

- 1) Ethan's ball pit has 225 blue balls and 95 red balls. What is the total number of balls in the pit?



\_\_\_\_\_

- 2) There are 164 students in Union County High School's drama club. If 51 of the students are girls, how many boys are in the club?



\_\_\_\_\_


- 3) Gary's fish tank got 85 black pebbles. How many pebbles did he use?

Gain complete access to the largest collection of worksheets in all subjects!

Members, please log in to download this worksheet.


Not a member? Please sign up to gain complete access.

[www.mathworksheets4kids.com](http://www.mathworksheets4kids.com)



\_\_\_\_\_

- 4) Tony used 120 red blocks. How many blue blocks did he use?



\_\_\_\_\_


- 5) Jenna, a florist, orders 250 roses, some red and some white. If there are 80 white roses, how many roses are red?



\_\_\_\_\_

**Three-Digit & Two-Digit Addition & Subtraction**

- 1) Ethan's ball pit has 225 blue balls and 95 red balls. What is the total number of balls in the pit?



**320 balls**


- 2) There are 164 students in Union County High School's drama club. If 51 of the students are girls, how many boys are in the club?

**113**




- 3) Gary's fish tank got 267 black pebbles. How many pebbles did he have before?

**652 pebbles**



- 4) Tony used 120 red blocks to build a tower. How many more blocks did he use to build a taller tower?

**165 blocks**



- 5) Jenna, a florist, orders 250 roses, some red and some white. If there are 80 white roses, how many roses are red?

**170 roses**



**PREVIEW**

Gain complete access to the largest collection of worksheets in all subjects!

Members, please log in to download this worksheet.

Not a member? Please sign up to gain complete access.

[www.mathworksheets4kids.com](http://www.mathworksheets4kids.com)