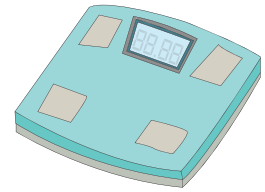



Three-Digit & Two-Digit Addition & Subtraction

- 1) John stands on a weighing scale with his backpack on. It says 140 pounds on the dial. If the backpack weighs 32 pounds. How much does John weigh?



- 2) Donna's red dress is decorated with 450 golden crystals and 95 silver crystals. How many crystals beautify the dress in total?



- 3) In a class of 120 students, 75 opt for music. How many opt for a selective course while the rest opt for music? Do you think you should choose music?

Gain complete access to the largest collection of worksheets in all subjects!

Members, please
log in to
download this
worksheet.


Not a member?
Please sign up to
gain complete
access.

www.mathworksheets4kids.com



- 4) Leah buys a bag of 205 candies, 75 are lemon candies. How many are not lemon candies?

Out of the total of lemon



- 5) Carla has finished 189 pages of a novel. She still has 67 more pages to read. How many pages does the novel have in all?

