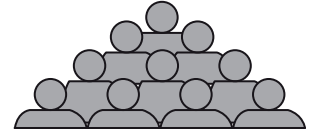
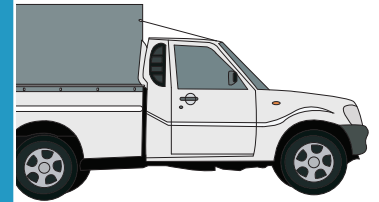


Multi-Digit Addition & Subtraction

- 1) Ariel's town has a population of 49,883. Her cousin Joey's town has a population of 28,760. How many more people live in Ariel's town than in Joey's town?



- 2) A truck is transporting 23,455 pears and 4,431 oranges from an orchard. How many oranges and pears are being transported in all?



- 3) The Millers purchased one apartment for a total of \$540,000. If they purchased another apartment for \$120,000, how much more money did they spend on the first apartment?

Gain complete access to the largest collection of worksheets in all subjects!

Members, please log in to download this worksheet.

Not a member? Please sign up to gain complete access.

www.mathworksheets4kids.com



- 4) Marlene dedicated 1,089 words to writing a story. She wrote 1,089 words for the first part and 6,543 words for the second part. How many words did she write in all?



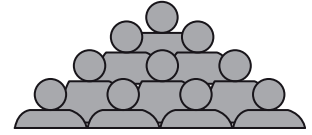
- 5) The grocery store near Caleb's house sold 9,657 pounds of apples last year. The store increased the sales by 2,976 pounds this year. How many pounds of apples were sold this year?



Multi-Digit Addition & Subtraction

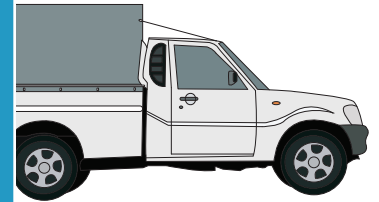
- 1) Ariel's town has a population of 49,883. Her cousin Joey's town has a population of 28,760. How many more people live in Ariel's town than in Joey's town?

21,123 people



- 2) A truck is transporting 23,455 pears and 4,431 oranges from an orchard. How many oranges and pears are being transported in all?

27,886 oranges



- 3) The Millers purchased one apartment for a total of \$540,000. If they purchased another apartment for \$340,000, how much more did they spend on the second apartment?

\$340,000



- 4) Marlene dedicated 1,089 words to her assignment. She wrote 1,089 words for the first part and 6,543 words for the second part. How many words did she write in total for the assignment?

5,454 words



- 5) The grocery store near Caleb's house sold 9,657 pounds of apples last year. The store increased the sales by 2,976 pounds this year. How many pounds of apples were sold this year?

12,633 pounds



PREVIEW

Gain complete access to the largest collection of worksheets in all subjects!

Members, please log in to download this worksheet.

Not a member? Please sign up to gain complete access.

www.mathworksheets4kids.com