

Name : \_\_\_\_\_

## Addition & Subtraction within 10

Sheet 1

- 1) Amy purchased 5 chocolate cupcakes and 3 red velvet cupcakes. How many cupcakes did she buy in all?




\_\_\_\_\_

- 2) If 7 out of the 9 kids who took part in a science quiz show were girls, how many boys were there?



\_\_\_\_\_

- 3) An auto repair shop is open for 4 hours in the morning and for 3 hours in the evening. For how many hours is the shop open in a day?



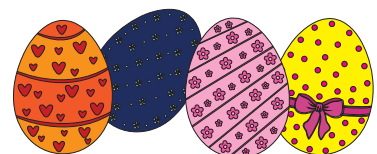
\_\_\_\_\_

- 4) Denver took 10 minutes to walk to school. Ashley took 6 minutes to reach there. How many more minutes did Denver take to reach school than Ashley?



\_\_\_\_\_

- 5) Ms. Anderson bought 6 Easter eggs for her children. She then bought 4 more. What was the total number of Easter eggs Ms. Anderson bought?



\_\_\_\_\_

**Addition & Subtraction within 10**

- 1) Amy purchased 5 chocolate cupcakes and 3 red velvet cupcakes. How many cupcakes did she buy in all?



**8 cupcakes**

---


- 2) If 7 out of the 9 kids who took part in a science quiz show were girls, how many boys were there?



**2 boys**

---

- 3) An auto repair shop is open for 4 hours in the morning and for 3 hours in the evening. For how many hours is the shop open in a day?



**7 hours**

---

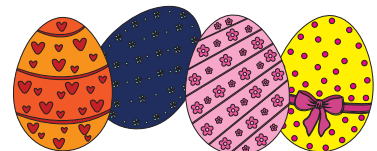
- 4) Denver took 10 minutes to walk to school. Ashley took 6 minutes to reach there. How many more minutes did Denver take to reach school than Ashley?



**4 minutes**

---

- 5) Ms. Anderson bought 6 Easter eggs for her children. She then bought 4 more. What was the total number of Easter eggs Ms. Anderson bought?



**10 Easter eggs**

---