

**Addition & Subtraction within 10**

- 1) Mom purchased 3 packs of breadcrumbs. At the end of the week, she had 1 pack left. How many packs of breadcrumbs had been used?



\_\_\_\_\_

- 2) Athena wrapped 2 gifts, and Beth wrapped 5 gifts. How many gifts did Athena and Beth wrap altogether?



\_\_\_\_\_


- 3) Mathew has 4 black pens and 2 red pens. How many more red pens does he have than blue pens?

**PREVIEW**  
Gain complete access to the largest collection of worksheets in all subjects!

Members, please log in to download this worksheet.

Not a member? Please sign up to gain complete access.

[www.mathworksheets4kids.com](http://www.mathworksheets4kids.com)



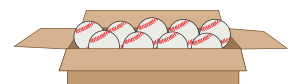
\_\_\_\_\_

- 4) A tiny fruit basket contains 3 strawberries, 2 blueberries, and 4 raspberries. How many berries are in the basket?



\_\_\_\_\_

- 5) Greg has a box of 9 baseballs. He gives 6 baseballs to his coach. How many baseballs are left?



\_\_\_\_\_

**Addition & Subtraction within 10**

- 1) Mom purchased 3 packs of breadcrumbs. At the end of the week, she had 1 pack left. How many packs of breadcrumbs had been used?



**2 packs**

---

- 2) Athena wrapped 2 gifts, and Beth wrapped 5 gifts. How many gifts did Athena and Beth wrap altogether?




**7 gifts**

---

- 3) Mathew has 4 black pens and 3 red pens. How many more red pens does he have than blue pens?

**1 red pen**

---



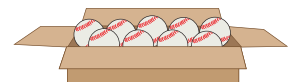
- 4) A tiny fruit basket contains 3 strawberries and 5 blueberries. How many berries are in the basket?

**8 berries**

---



- 5) Greg has a box of 9 baseballs. He gives 6 baseballs to his coach. How many baseballs are left?



**3 baseballs**

---

# PREVIEW

Gain complete access to the largest collection of worksheets in all subjects!

Members, please log in to download this worksheet.

Not a member? Please sign up to gain complete access.

[www.mathworksheets4kids.com](http://www.mathworksheets4kids.com)