



Addition & Subtraction within 10

- 1) There are 8 rungs on a ladder. If the top 2 rungs are broken, how many rungs are in good condition?



- 2) Brad learned 2 new words from the dictionary in the morning and 1 new word at bedtime. How many new words did Brad learn today?



- 3) There were 7 pair of shoes in a box. If the actor bought 3 more shoes, how many shoes are there in all?

Gain complete access to the largest collection of worksheets in all subjects!

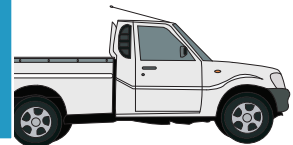
Members, please log in to download this worksheet.

Not a member? Please sign up to gain complete access.



- 4) While walking he saw 5 cars. How many more cars than pickup trucks did he see?

www.mathworksheets4kids.com




- 5) Fiona collected 3 plastic bottles and 3 plastic jars. How many plastic bottles and jars did she collect in all?



Addition & Subtraction within 10


- 1) There are 8 rungs on a ladder. If the top 2 rungs are broken, how many rungs are in good condition?

6 rungs



- 2) Brad learned 2 new words from the dictionary in the morning and 1 new word at bedtime. How many new words did Brad learn today?

3 new



- 3) There were 7 pair paintings, how many more paintings did the painter buy?

4 pair

Gain complete access to the largest collection of worksheets in all subjects!

actor bought 3

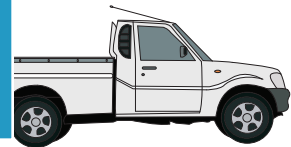


- 4) While walking he saw 5 cars. How many more cars did he see?

2 cars

www.mathworksheets4kids.com

ckup trucks. How



- 5) Fiona collected 3 plastic bottles and 3 plastic jars. How many plastic bottles and jars did she collect in all?

6 items

