


Addition & Subtraction within 20

- 1) Mike ate 3 slices of pizza. Jared ate 5 slices of pizza. How many slices of pizza did Mike and Jared eat in all?



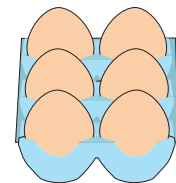
- 2) A teacher has a stack of 12 history and geography books on her table. If there are 11 geography books. how many history books are there?



- 3) A farmer collected _____ eggs in the morning. His wife collected 10 more eggs in the afternoon. How many eggs did they collect in all?

Gain complete access to the largest collection of worksheets in all subjects!

_____ number of eggs




- 4) Helen wants to do a play. She needs 20 scary masks. If she already has 15 masks, how many more masks does she need?

Members, please log in to download this worksheet.

Not a member? Please sign up to gain complete access.




- 5) Ken took 13 minutes to cook the burger patties and another 5 minutes to assemble the burgers. How much time did he take to make the burgers?



Addition & Subtraction within 20

- 1) Mike ate 3 slices of pizza. Jared ate 5 slices of pizza. How many slices of pizza did Mike and Jared eat in all?



8 slices

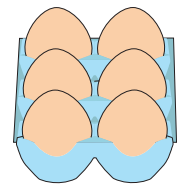
- 2) A teacher has a stack of 12 history and geography books on her table. If there are 11 geography books, how many history books are there?

1 histo



- 3) A farmer collected 15 eggs in the morning. His wife collected 10 more eggs in the afternoon. How many eggs did they collect in all?

20 e




- 4) Helen wants to dress up for a party. She needs 20 scary masks. If she already has 8 masks, how many more does she need?

12 masks



- 5) Ken took 13 minutes to cook the burger patties and another 5 minutes to assemble the burgers. How much time did he take to make the burgers?

18 minutes



PREVIEW

Gain complete access to the largest collection of worksheets in all subjects!

Members, please log in to download this worksheet.

Not a member? Please sign up to gain complete access.

www.mathworksheets4kids.com