
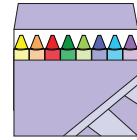


Name : _____

Adding One



- 1) Bob has 7 crayons. His friend gives him 1 more crayon. How many crayons does Bob have now?



- 2) Sadie ate 5 muffins for breakfast. She still felt hungry, so she ate 1 more muffin.

all?



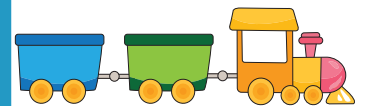
- 3) Dean has 3 marbles. How many marbles does Dean have in total?

marble. How many




- 4) Tom has 4 toy trains. How many toy trains are there in total?

toy trains are



- 5) Ivy made 2 sandwiches for herself. She then made 1 sandwich for her brother. How many sandwiches did Ivy make in total?



PREVIEW

Gain complete access to the largest collection of worksheets in all subjects!

Members, please log in to download this worksheet.

Not a member? Please sign up to gain complete access.

www.mathworksheets4kids.com