
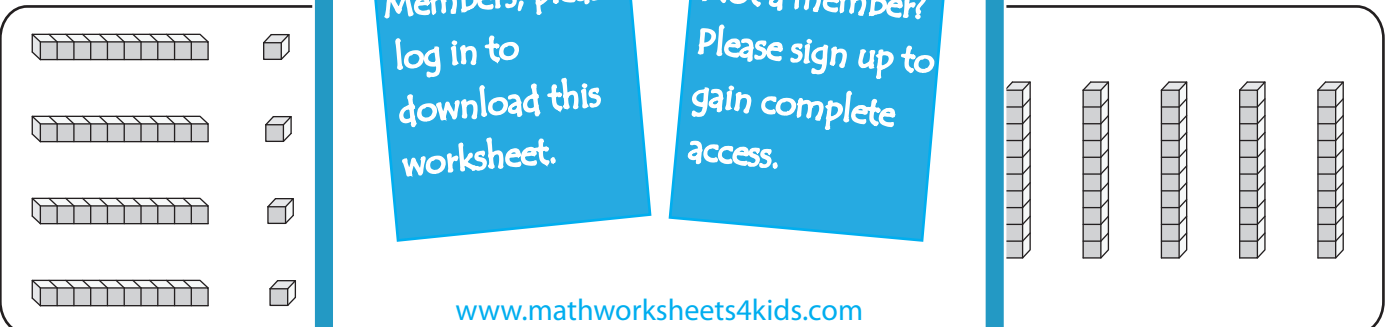


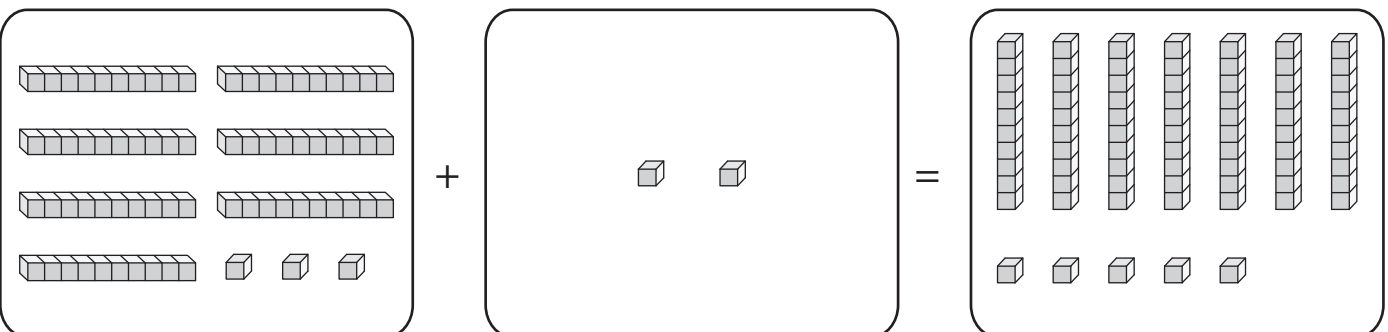
2-Digit Plus 1-Digit Addition

Count the base-10 blocks to frame each addition equation.

1) 
 The first box contains three rods (each 10 units) and three units. The second box contains three units. The third box contains three rods and six units. Below each box is a blank line for the number.

2) 
 The first box contains three rods and four units. The second box contains three units. The third box contains three rods and seven units. Below each box is a blank line for the number.

3) 
 The first box contains four rods and three units. The second box contains three units. The third box contains four rods and six units. Below each box is a blank line for the number.

4) 
 The first box contains four rods and three units. The second box contains two units. The third box contains four rods and five units. Below each box is a blank line for the number.

PREVIEW

Gain complete access to the largest collection of worksheets in all subjects!

Members, please log in to download this worksheet.

Not a member? Please sign up to gain complete access.

www.mathworksheets4kids.com