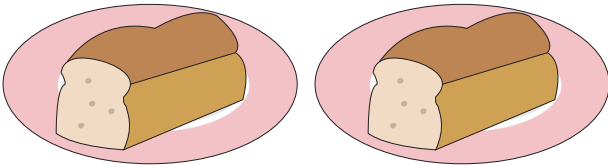


Adding Doubles

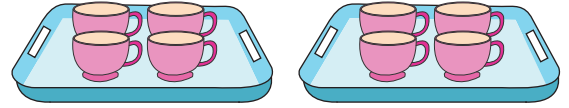
Count the objects and complete each doubles fact.

1)



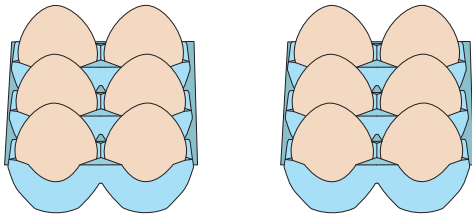
$$1 + 1 = \underline{\hspace{2cm}}$$

2)




$$4 + 4 = \underline{\hspace{2cm}}$$

3)




$$6 + 6 = \underline{\hspace{2cm}}$$

4)




$$2 + 2 = \underline{\hspace{2cm}}$$

5)



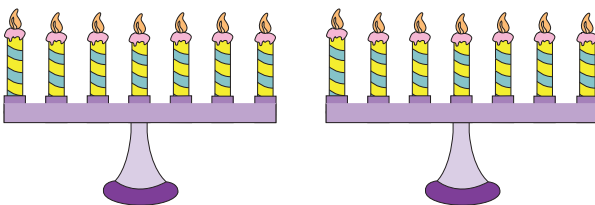
$$3 + 3 = \underline{\hspace{2cm}}$$

6)




$$9 + 9 = \underline{\hspace{2cm}}$$

7)



$$7 + 7 = \underline{\hspace{2cm}}$$

8)



$$5 + 5 = \underline{\hspace{2cm}}$$