














Making 10

Draw more shapes to make 10 and complete the addition equation.

1)






2)

4 + _____

_____ = 10







3)





		
		

7 + _____

_____ = 10

5)

5 + _____ = 10

6 + _____ = 10

PREVIEW

Gain complete access to the largest collection of worksheets in all subjects!

Members, please log in to download this worksheet.

Not a member? Please sign up to gain complete access.

www.mathworksheets4kids.com

Making 10

Draw more shapes to make 10 and complete the addition equation.

1)

2)

$4 + \underline{6} = 10$

$\underline{1} = 10$

3)

$7 + \underline{3} = 10$

$\underline{8} = 10$

5)

$5 + \underline{5} = 10$

$6 + \underline{4} = 10$

PREVIEW

Gain complete access to the largest collection of worksheets in all subjects!

Members, please log in to download this worksheet.

Not a member? Please sign up to gain complete access.

www.mathworksheets4kids.com